

PART : MATHEMATICS

1 The probability that a randomly chosen 2×2 matrix with all the enthes from the set of first 10 primes. is singular, is equal to:

- (A) $\frac{133}{10^4}$ (B) $\frac{18}{10^3}$ (C) $\frac{19}{10^3}$ (D) $\frac{271}{10^4}$

NTA Ans. C

Reso Ans. C

Sol.

Let $A = \begin{bmatrix} a & b \\ c & d \end{bmatrix}$ where a,b,c,d are prime.

Total number of matrices A formed = 10^4

Let S be a matrix from set of matrices A such that S is singular.

For singular matrix $|S| = ad - bc = 0 \Rightarrow ad = bc$

Case I $a \neq d$

then number of matrices = $(10 \times 9) \times 2! = 180$

Case II $a = d$

then number of matrices = $10 \times 1 = 10$

So required probability = $\frac{10 \times 9 \times 2! + 10}{10^4} = \frac{19}{1000} = 0.019$

2 Let the solution curve of the differential equation

$x \frac{dy}{dx} - y = \sqrt{y^2 + 16x^2}$, $y(1) = 3$ be $y = y(x)$. Then $y(2)$ is equal to :

- (A) 15 (B) 11 (C) 13 (D) 17

NTA Ans. A

Reso Ans. A

Sol.

$$\frac{dy}{dx} = \frac{y + \sqrt{y^2 + 16x^2}}{x}$$

Let $y = vx$

$$\frac{dy}{dx} = v + x \frac{dv}{dx}$$

$$v + x \frac{dv}{dx} = \frac{vx + \sqrt{v^2x^2 + 16x^2}}{x} = v + \sqrt{v^2 + 16}$$

$$\int \frac{dv}{\sqrt{v^2 + 16}} = \int \frac{dx}{x}$$

$$\ell n |v + \sqrt{v^2 + 16}| = \ell nx + \ell nc$$

Resonance Eduventures Ltd.

Reg. Office & Corp. Office : CG Tower, A-46 & 52, IPIA, Near City Mall, Jhalawar Road, Kota (Raj.) - 324005

Ph. No.: +91-744-2777777, 2777700 | FAX No. : +91-022-39167222

To Know more : sms RESO at 56677 | Website : www.resonance.ac.in | E-mail : contact@resonance.ac.in | CIN : U80302RJ2007PLC024029

Toll Free : 1800 258 5555 | 7340010333 | facebook.com/ResonanceEdu | twitter.com/ResonanceEdu | www.youtube.com/resowatch | blog.resonance.ac.in

$$\frac{y}{x} + \frac{\sqrt{y^2 + 16x^2}}{x} = cx$$

$$y + \sqrt{y^2 + 16x^2} = cx^2$$

$$y(1) = 3$$

$$\Rightarrow c = 8$$

$$\text{at } x = 2 \quad y + \sqrt{y^2 + 64} = 32$$

$$y^2 + 64 = (32 - y)^2$$

$$64(1+y) = 32 \times 32$$

$$y = 15$$

3

If the mirror image of the point (2, 4, 7) in the plane $3x - y + 4z = 2$ is (a, b, c), then $2a + b + 2c$ is equal to :

(A) 54

(B) 50

(C) -6

(D) -42

NTA Ans. C

Reso Ans. C

Sol.

The equation of plane is $3x - y + 4z = 2$

the mirror image of point (2,4,7) in given plane is (a, b, c) then

$$\frac{a-2}{3} = \frac{b-4}{-1} = \frac{c-7}{4} = \frac{2(6-4+28-2)}{(9+1+16)}$$

$$\frac{a-2}{3} = \frac{b-4}{-1} = \frac{c-7}{4} = -\frac{28}{13}$$

$$\frac{a-2}{3} = -\frac{28}{13} \Rightarrow a = \frac{-28 \times 3}{13} + 2 = \frac{-58}{13}$$

$$\frac{b-4}{-1} = \frac{-28}{13} \Rightarrow b = \frac{28}{13} + 4 = \frac{80}{13}$$

$$\frac{c-7}{4} = \frac{-28}{13} \Rightarrow c = \frac{-28 \times 4}{13} + 7 = -\frac{21}{13}$$

the mirror image of point (2,4,7) in given plane is $\left(-\frac{58}{13}, \frac{80}{13}, -\frac{21}{13}\right)$

$$\text{Hence the value of } (2a + b + 2c) = \frac{-116 + 80 - 42}{13} = -\frac{78}{13} = -6$$

Resonance Eduventures Ltd.

Reg. Office & Corp. Office : CG Tower, A-46 & 52, IPIA, Near City Mall, Jhalawar Road, Kota (Raj.) - 324005

Ph. No.: +91-744-2777777, 2777700 | FAX No. : +91-022-39167222

To Know more : sms RESO at 56677 | Website : www.resonance.ac.in | E-mail : contact@resonance.ac.in | CIN : U80302RJ2007PLC024029

Toll Free : 1800 258 5555 | 7340010333 | [facebook.com/ResonanceEdu](https://www.facebook.com/ResonanceEdu) | twitter.com/ResonanceEdu | www.youtube.com/resovatch | blog.resonance.ac.in

4

Let $f: \mathbb{R} \rightarrow \mathbb{R}$ be a function defined by :

$$f(x) = \begin{cases} \max_{t \leq x} \{t^3 - 3t\} & ; x \leq 2 \\ x^2 + 2x - 6 & ; 2 < x < 3 \\ [x - 3] + 9 & ; 3 \leq x \leq 5 \\ 2x + 1 & ; x > 5 \end{cases}$$

where $[t]$ is the greatest integer less than or equal to t . Let m be the number of points where

f is not differentiable and $I = \int_{-2}^2 f(x) dx$. Then the ordered pair (m, I) is equal to :

- (A) $\left(3, \frac{27}{4}\right)$ (B) $\left(3, \frac{23}{4}\right)$ (C) $\left(4, \frac{27}{4}\right)$ (D) $\left(4, \frac{23}{4}\right)$

NTA Ans. C

Reso Ans. C

5

Let $\vec{a} = \alpha \hat{i} + 3\hat{j} - \hat{k}$, $\vec{b} = 3\hat{i} - \beta\hat{j} + 4\hat{k}$ and $\vec{c} = \hat{i} + 2\hat{j} - 2\hat{k}$ where $\alpha, \beta \in \mathbb{R}$, be three

vectors. If the projection of \vec{a} on \vec{c} is $\frac{10}{3}$ and $\vec{b} \times \vec{c} = -6\hat{i} + 10\hat{j} + 7\hat{k}$, then the value of

$\alpha + \beta$ is equal to :

- (A) 3 (B) 4 (C) 5 (D) 6

NTA Ans. A

Reso Ans. A

6

The area enclosed by $y^2 = 8x$ and $y = \sqrt{2}x$ that lies outside the triangle formed by

$y = \sqrt{2}x$, $x = 1$, $y = 2\sqrt{2}$, is equal to :

- A $\frac{16\sqrt{2}}{6}$
B $\frac{11\sqrt{2}}{6}$
C $\frac{13\sqrt{2}}{6}$
D $\frac{5\sqrt{2}}{6}$

NTA Ans. C






Reso Ans. C

Resonance Eduventures Ltd.

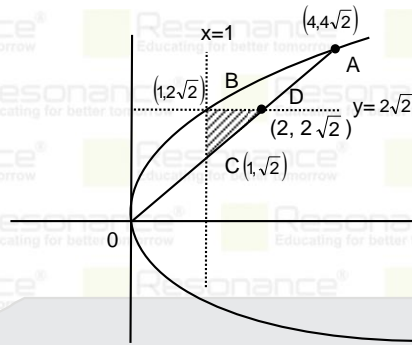
Reg. Office & Corp. Office : CG Tower, A-46 & 52, IPIA, Near City Mall, Jhalawar Road, Kota (Raj.) - 324005

Ph. No.: +91-744-2777777, 2777700 | FAX No. : +91-022-39167222

To Know more : sms RESO at 56677 | Website : www.resonance.ac.in | E-mail : contact@resonance.ac.in | CIN : U80302RJ2007PLC024029

Toll Free : 1800 258 5555 |  7340010333 |  facebook.com/ResonanceEdu |  twitter.com/ResonanceEdu |  www.youtube.com/resowatch |  blog.resonance.ac.in

Sol.



$$\text{area of } \triangle BCD = \frac{1}{2}(\sqrt{2})(1) = \frac{1}{\sqrt{2}}$$

$$\text{area between curves} = \int_0^4 (2\sqrt{2}x^2 - \sqrt{2}x) dx$$

$$= \left(\frac{2\sqrt{2}x^3}{3} - \frac{x^2}{\sqrt{2}} \right)_0^4 = \left(\frac{4}{3}\sqrt{2}x^3 - \frac{1}{\sqrt{2}}x^2 \right)_0^4$$

$$= \frac{32\sqrt{2}}{3} - 8\sqrt{2} = \frac{8\sqrt{2}}{3}$$

$$\text{Required area} = \left(\frac{8\sqrt{2}}{3} - \frac{1}{\sqrt{2}} \right) = \left(\frac{8\sqrt{2}}{3} - \frac{\sqrt{2}}{2} \right) = \frac{13\sqrt{2}}{6}$$

7 If the system of linear equations

$$2x + y - z = 7$$

$$x - 3y + 2z = 1$$

$$x + 4y + \delta z = k, \text{ where } \delta, k \in \mathbb{R}$$

has infinitely many solutions, then $\delta + k$ is equal to :

- (A) -3 (B) 3 (C) 6 (D) 9

NTA Ans. **B**

Reso Ans. **B**

8 Let α and β be the roots of the equation $x^2 + (2i - 1) = 0$. Then, the value of $|\alpha^8 + \beta^8|$ is equal to :

- (A) 50 (B) 250 (C) 1250 (D) 1500

NTA Ans. **A**

Reso Ans. **A**

Resonance Eduventures Ltd.

Reg. Office & Corp. Office : CG Tower, A-46 & 52, IPIA, Near City Mall, Jhalawar Road, Kota (Raj.) - 324005

Ph. No.: +91-744-2777777, 2777700 | FAX No. : +91-022-39167222

To Know more : sms RESO at 56677 | Website : www.resonance.ac.in | E-mail : contact@resonance.ac.in | CIN : U80302RJ2007PLC024029

Toll Free : 1800 258 5555 | 7340010333 | facebook.com/ResonanceEdu | twitter.com/ResonanceEdu | www.youtube.com/resowatch | blog.resonance.ac.in

Sol.

$$x^2 + (2i - 1) = 0 \begin{cases} \alpha \\ \beta \end{cases}$$

$$\Rightarrow \alpha^2 = 1 - 2i \text{ and } \beta^2 = 1 - 2i$$

$$\Rightarrow \alpha^2 = \beta^2 = 1 - 2i$$

$$\Rightarrow \alpha^8 = \beta^8$$

Hence $|\alpha^8 + \beta^8| = 2|\alpha^2|^4 = 2(\sqrt{1+4})^4 = 50$

9 Let $\Delta \in \{\wedge, \vee, \Rightarrow, \Leftrightarrow\}$ be such that $(p \wedge q) \Delta ((p \vee q) \Rightarrow q)$ is a tautology. Then Δ is equal to :

- (A) \wedge (B) \vee (C) \Rightarrow (D) \Leftrightarrow

NTA Ans. C

Reso Ans. C

Sol.

p	q	$p \wedge q$	$(p \vee q) \Rightarrow q$
T	T	T	T
T	F	F	F
F	T	F	T
F	F	F	T

10

Let $A = [a_{ij}]$ be a square matrix of order 3 such that $a_{ij} = 2^{j-i}$, for all $i, j = 1, 2, 3$. Then, the matrix $A^2 + A^3 + \dots + A^{10}$ is equal to :

- (A) $\left(\frac{3^{10} - 3}{2}\right)A$ (B) $\left(\frac{3^{10} - 1}{2}\right)A$ (C) $\left(\frac{3^{10} + 1}{2}\right)A$ (D) $\left(\frac{3^{10} + 3}{2}\right)A$

NTA Ans. A

Reso Ans. A

Sol.

$$A = \begin{bmatrix} 1 & 2 & 2^2 \\ 2^{-1} & 1 & 2 \\ 2^{-2} & 2^{-1} & 1 \end{bmatrix} \Rightarrow A^2 = 3A, A^3 = 3^2A, \dots, A^{10} = 3^9A$$

Now,

$$A^2 + A^3 + \dots + A^{10}$$

$$= 3A + 3^2A + \dots + 3^9A$$

$$= (3 + 3^2 + 3^3 + \dots + 3^9)A$$

$$= \frac{3(3^9 - 1)}{2}A = \left(\frac{3^{10} - 3}{2}\right)A$$

11

Let a set $A = A_1 \cup A_2 \cup \dots \cup A_k$, where $A_i \cap A_j = \phi$ for $i \neq j, 1 \leq i, j \leq k$. Define the relation R from A to A by $R = \{(x, y) : y \in A_i \text{ if and only if } x \in A_i, 1 \leq i \leq k\}$. Then, R is :

- A reflexive, symmetric but not transitive
 B reflexive, transitive but not symmetric
 C reflexive but not symmetric and transitive
 D an equivalence relation

Resonance Eduventures Ltd.

Reg. Office & Corp. Office : CG Tower, A-46 & 52, IPIA, Near City Mall, Jhalawar Road, Kota (Raj.) - 324005

Ph. No.: +91-744-2777777, 2777700 | FAX No. : +91-022-39167222

To Know more : sms RESO at 56677 | Website : www.resonance.ac.in | E-mail : contact@resonance.ac.in | CIN : U80302RJ2007PLC024029

Toll Free : 1800 258 5555 | 7340010333 | [facebook.com/ResonanceEdu](https://www.facebook.com/ResonanceEdu) | twitter.com/ResonanceEdu | www.youtube.com/resowatch | blog.resonance.ac.in

NTA Ans. D

Reso Ans. D

12

Let $\{a_n\}_{n=0}^{\infty}$ be a sequence such that $a_0 = a_1 = 0$ and $a_{n+2} = 2a_{n+1} - a_n + 1$ for all $n \geq 0$.

Then, $\sum_{n=2}^{\infty} \frac{a_n}{7^n}$ is equal to :

- (A) $\frac{6}{343}$ (B) $\frac{7}{216}$ (C) $\frac{8}{343}$ (D) $\frac{49}{216}$

NTA Ans. D

Reso Ans. D

13

The distance between the two points A and A' which lie on $y = 2$ such that both the line segments AB and A'B (where B is the point (2, 3)) subtend angle $\frac{\pi}{4}$ at the origin, is equal

to :

- (A) 10 (B) $\frac{48}{5}$ (C) $\frac{52}{5}$ (D) 3

NTA Ans. C

Reso Ans. C

14

A wire of length 22 m is to be cut into two pieces. One of the pieces is to be made into a square and the other into an equilateral triangle. Then, the length of the side of the equilateral triangle, so that the combined area of the square and the equilateral triangle is minimum, is :

- A $\frac{22}{9 + 4\sqrt{3}}$
 B $\frac{66}{9 + 4\sqrt{3}}$
 C $\frac{22}{4 + 9\sqrt{3}}$
 D $\frac{66}{4 + 9\sqrt{3}}$

NTA Ans. B

Reso Ans. B

Resonance Eduventures Ltd.

Reg. Office & Corp. Office : CG Tower, A-46 & 52, IPIA, Near City Mall, Jhalawar Road, Kota (Raj.) - 324005

Ph. No.: +91-744-2777777, 2777700 | FAX No. : +91-022-39167222

To Know more : sms RESO at 56677 | Website : www.resonance.ac.in | E-mail : contact@resonance.ac.in | CIN : U80302RJ2007PLC024029

Toll Free : 1800 258 5555  7340010333  facebook.com/ResonanceEdu  twitter.com/ResonanceEdu  www.youtube.com/resowatch  blog.resonance.ac.in

15

The domain of the function $\cos^{-1} \left(\frac{2 \sin^{-1} \left(\frac{1}{4x^2-1} \right)}{\pi} \right)$ is :

Question:

- A $\mathbb{R} - \left\{ -\frac{1}{2}, \frac{1}{2} \right\}$
- B $(-\infty, -1] \cup [1, \infty) \cup \{0\}$
- C $\left(-\infty, -\frac{1}{2}\right) \cup \left(\frac{1}{2}, \infty\right) \cup \{0\}$
- D $\left(-\infty, -\frac{1}{\sqrt{2}}\right] \cup \left[\frac{1}{\sqrt{2}}, \infty\right) \cup \{0\}$

NTA Ans. D

Reso Ans. D

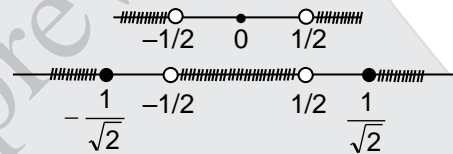
Sol.

$$-1 \leq \frac{2 \sin^{-1} \left(\frac{1}{4x^2-1} \right)}{\pi} \leq 1$$

$$\Rightarrow -\frac{\pi}{2} \leq \sin^{-1} \left(\frac{1}{4x^2-1} \right) \leq \frac{\pi}{2}$$

$$\Rightarrow -1 \leq \frac{1}{4x^2-1} \leq 1$$

$$\Rightarrow 0 \leq \frac{x^2}{(2x-1)(2x+1)} \text{ and } \frac{(\sqrt{2}x-1)(\sqrt{2}x-1)}{(2x-1)(2x+1)} \geq 0$$



$$\text{Domain} \left(\left(-\infty, -\frac{1}{\sqrt{2}}\right] \cup \{0\} \cup \left[\frac{1}{\sqrt{2}}, \infty\right) \right)$$

16

If the constant term in the expansion of $\left(3x^3 - 2x^2 + \frac{5}{x^5}\right)^{10}$ is $2^k \cdot l$, where l is an odd integer, then the value of k is equal to :

- (A) 6
- (B) 7
- (C) 8
- (D) 9

NTA Ans. D

Reso Ans. D

Resonance Eduventures Ltd.

Reg. Office & Corp. Office : CG Tower, A-46 & 52, IPIA, Near City Mall, Jhalawar Road, Kota (Raj.) - 324005

Ph. No.: +91-744-2777777, 2777700 | FAX No. : +91-022-39167222

To Know more : sms RESO at 56677 | Website : www.resonance.ac.in | E-mail : contact@resonance.ac.in | CIN : U80302RJ2007PLC024029

Toll Free : 1800 258 5555 | 7340010333 | [facebook.com/ResonanceEdu](https://www.facebook.com/ResonanceEdu) | twitter.com/ResonanceEdu | www.youtube.com/resowatch | blog.resonance.ac.in

Sol.

$$\left(3x^3 - 2x^2 + \frac{5}{x^5}\right)^{10} = x^{-50} (3x^8 - 2x^7 + 5)^{10}$$

constant term in $x^{-50} (3x^8 - 2x^7 + 5)^{10}$

coefficient of x^{50} in $(3x^8 - 2x^7 + 5)^{10}$

$$\text{coefficient of } x^{50} \text{ in } \sum \frac{10!}{r_1! r_2! r_3!} (3)^{r_1} (-2)^{r_2} (5)^{r_3} \cdot x^{8r_1 + 7r_2}$$

such that $r_1 + r_2 + r_3 = 10$ and $8r_1 + 7r_2 = 50$

$$\Rightarrow r_1 = 1; r_2 = 6 \text{ and } r_3 = 3$$

$$\text{Hence constant term is} = \frac{10!}{1!6!3!} (3)(-2)^6 (5)^3 = \frac{10!}{6!3!} (3)(2)^6 (5)^3 = 2^9 \times 5^4 \times 21$$

Hence $k = 9$

17

$$\int_0^5 \cos \left(\pi \left(x - \left[\frac{x}{2} \right] \right) \right) dx,$$

where $[t]$ denotes greatest integer less than or equal to t , is equal to :

(A) -3

(B) -2

(C) 2

(D) 0

NTA Ans. D

Reso Ans. D

Sol.

$$\begin{aligned} & \int_0^5 \cos \left(\pi \left(x - \left[\frac{x}{2} \right] \right) \right) dx \\ &= \int_0^2 \cos \left(\pi \left(x - \left[\frac{x}{2} \right] \right) \right) dx + \int_2^4 \cos \left(\pi \left(x - \left[\frac{x}{2} \right] \right) \right) dx + \int_4^5 \cos \left(\pi \left(x - \left[\frac{x}{2} \right] \right) \right) dx \\ &= \int_0^2 \cos(\pi x - 0) dx + \int_2^4 \cos(\pi x - \pi) dx + \int_4^5 \cos(\pi x - 2\pi) dx \\ &= \left[\frac{\sin \pi x}{\pi} \right]_0^2 - \left[\frac{\sin \pi x}{\pi} \right]_2^4 + \left[\frac{\sin \pi x}{\pi} \right]_4^5 \\ &= 0 \end{aligned}$$

Resonance Eduventures Ltd.

Reg. Office & Corp. Office : CG Tower, A-46 & 52, IPIA, Near City Mall, Jhalawar Road, Kota (Raj.) - 324005

Ph. No.: +91-744-2777777, 2777700 | FAX No. : +91-022-39167222

To Know more : sms RESO at 56677 | Website : www.resonance.ac.in | E-mail : contact@resonance.ac.in | CIN : U80302RJ2007PLC024029

Toll Free : 1800 258 5555 |  7340010333 |  facebook.com/ResonanceEdu |  twitter.com/ResonanceEdu |  www.youtube.com/resowatch |  blog.resonance.ac.in

18

Let PQ be a focal chord of the parabola $y^2=4x$ such that it subtends an angle of $\frac{\pi}{2}$ at the point (3, 0). Let the line segment PQ be also a focal chord of the ellipse

$E: \frac{x^2}{a^2} + \frac{y^2}{b^2} = 1, a^2 > b^2$. If e is the eccentricity of the ellipse E, then the value of $\frac{1}{e^2}$ is

equal to :

A $1 + \sqrt{2}$

B $3 + 2\sqrt{2}$

C $1 + 2\sqrt{3}$

D $4 + 5\sqrt{3}$

NTA Ans. B

Reso Ans. B

19.

Let the tangent to the circle $C_1 : x^2 + y^2 = 2$ at the point M(-1, 1) intersect the circle $C_2 : (x-3)^2 + (y-2)^2 = 5$, at two distinct points A and B. If the tangents to C_2 at the points A and B intersect at N, then the area of the triangle ANB is equal to :

A $\frac{1}{2}$

B $\frac{2}{3}$

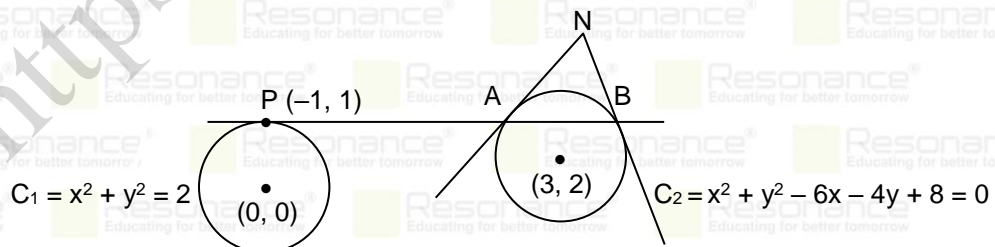
C $\frac{1}{6}$

D $\frac{5}{3}$

NTA Ans. C

Reso Ans. C

Sol.



Equation of tangent to circle $x^2 + y^2 = 2$ at point P(-1, 1) is

$T = 0$

$x(-1) + y(1) = 2$

$-x + y = 2$

Resonance Eduventures Ltd.

Reg. Office & Corp. Office : CG Tower, A-46 & 52, IPIA, Near City Mall, Jhalawar Road, Kota (Raj.) - 324005

Ph. No.: +91-744-2777777, 2777700 | FAX No. : +91-022-39167222

To Know more : sms RESO at 56677 | Website : www.resonance.ac.in | E-mail : contact@resonance.ac.in | CIN : U80302RJ2007PLC024029

Toll Free : 1800 258 5555 | 7340010333 | [facebook.com/ResonanceEdu](https://www.facebook.com/ResonanceEdu) | twitter.com/ResonanceEdu | www.youtube.com/resowatch | blog.resonance.ac.in

$$x - y + 2 = 0 \quad \dots(1)$$

Let point N(h, k)

Equation of chord of contact of circle (2) drawn from point N(h, k) is

$$T = 0$$

$$hx + ky - 3(x + h) - 2(y + k) + 8 = 0$$

$$(h - 3)x + (k - 2)y - 3h - 2k + 8 = 0 \quad \dots(2)$$

by comparing (1) and (2)

$$\frac{h-3}{1} = \frac{k-2}{-1} = \frac{3h+2k-8}{-2}$$

$$-h + 3 = k - 2 \text{ and } -2h + 6 = 3h + 2k - 8$$

$$h + k = 5 \quad 5h + 2k = 14$$

$$\text{So, } N\left(\frac{4}{3}, \frac{11}{3}\right)$$

Point of intersection of chord AB and circle (2)

$$(x - 3)^2 + x^2 = 5$$

$$2x^2 - 6x + 4 = 0$$

$$x^2 - 3x + 2 = 0$$

$$\Rightarrow x = 1, 2$$

So, A(1,3) and B(2,4)

$$\text{Now area of } \triangle ANB = \frac{1}{2} \begin{vmatrix} 1 & 3 & 1 \\ 2 & 4 & 1 \\ 4 & 11 & 3 \end{vmatrix} = \frac{1}{2} \left[1\left(4 - \frac{11}{3}\right) - 3\left(2 - \frac{4}{3}\right) + 1\left(\frac{22}{3} - \frac{16}{3}\right) \right]$$

$$= \frac{1}{2} \left[\frac{1}{3} - \frac{6}{3} + \frac{6}{3} \right] = \frac{1}{6} \text{ square unit.}$$

20

Let the mean and the variance of 5 observations x_1, x_2, x_3, x_4, x_5 be $\frac{24}{5}$ and $\frac{194}{25}$ respectively.

If the mean and variance of the first 4 observation are $\frac{7}{2}$ and a respectively, then $(4a + x_5)$ is equal to :

(A) 13

(B) 15

(C) 17

(D) 18

NTA Ans. **B**

Reso Ans. **B**

Sol.

$$\frac{x_1 + x_2 + x_3 + x_4 + x_5}{5} = \frac{24}{5}$$

$$\Rightarrow x_1 + x_2 + x_3 + x_4 + x_5 = 24 \quad \dots(1)$$

$$\text{and } \frac{x_1^2 + x_2^2 + x_3^2 + x_4^2 + x_5^2}{5} - \left(\frac{24}{5}\right)^2 = \frac{194}{25}$$

Resonance Eduventures Ltd.

Reg. Office & Corp. Office : CG Tower, A-46 & 52, IPIA, Near City Mall, Jhalawar Road, Kota (Raj.) - 324005

Ph. No.: +91-744-2777777, 2777700 | FAX No. : +91-022-39167222

To Know more : sms RESO at 56677 | Website : www.resonance.ac.in | E-mail : contact@resonance.ac.in | CIN : U80302RJ2007PLC024029

Toll Free : 1800 258 5555 | 7340010333 | [facebook.com/ResonanceEdu](https://www.facebook.com/ResonanceEdu) | twitter.com/ResonanceEdu | www.youtube.com/resowatch | blog.resonance.ac.in

$$\frac{x_1^2 + x_2^2 + x_3^2 + x_4^2 + x_5^2}{5} = \frac{194}{25} + \frac{576}{25} = \frac{770}{25}$$

$$x_1^2 + x_2^2 + x_3^2 + x_4^2 + x_5^2 = 154 \quad \dots\dots(2)$$

Now

$$\frac{x_1 + x_2 + x_3 + x_4}{4} = \frac{7}{2}$$

$$\Rightarrow x_1 + x_2 + x_3 + x_4 = 14 \quad \dots\dots(3)$$

$$\Rightarrow \frac{x_1^2 + x_2^2 + x_3^2 + x_4^2}{4} - \left(\frac{7}{2}\right)^2 = a$$

$$\frac{154 - x_5^2}{4} - \frac{49}{4} = a$$

$$\frac{154}{4} - \frac{49}{4} - \frac{x_5^2}{4} = a$$

$$4a + x_5^2 = 105$$

from equation (1) and (3)

$$x_5 = 10, 4a = 5$$

$$\Rightarrow 4a + x_5 = 5 + 10 = 15$$

21 Let $S = \{z \in \mathbb{C} : |z - 2| \leq 1, z(1 + i) + \bar{z}(1 - i) \leq 2\}$. Let $|z - 4i|$ attains minimum and maximum values, respectively, at $z_1 \in S$ and $z_2 \in S$. If $5(|z_1|^2 + |z_2|^2) = \alpha + \beta\sqrt{5}$, where α and β are integers, then the value of $\alpha + \beta$ is equal to _____.

NTA Ans. 26

Reso Ans.

22 Let $y = y(x)$ be the solution of the differential equation

$$\frac{dy}{dx} + \frac{\sqrt{2}y}{2\cos^4 x - \cos 2x} = xe^{\tan^{-1}(\sqrt{2}\cot 2x)}, 0 < x < \frac{\pi}{2} \text{ with } y\left(\frac{\pi}{4}\right) = \frac{\pi^2}{32}.$$

If $y\left(\frac{\pi}{3}\right) = \frac{\pi^2}{18} e^{-\tan^{-1}(\alpha)}$, then the value of $3\alpha^2$ is equal to _____.

NTA Ans. 2

Reso Ans.

23 Let d be the distance between the foot of perpendiculars of the points $P(1, 2, -1)$ and $Q(2, -1, 3)$ on the plane $-x + y + z = 1$. Then d^2 is equal to _____.

NTA Ans. 26

Reso Ans.

Resonance Eduventures Ltd.

Reg. Office & Corp. Office : CG Tower, A-46 & 52, IPIA, Near City Mall, Jhalawar Road, Kota (Raj.) - 324005

Ph. No.: +91-744-2777777, 2777700 | FAX No. : +91-022-39167222

To Know more : sms RESO at 56677 | Website : www.resonance.ac.in | E-mail : contact@resonance.ac.in | CIN : U80302RJ2007PLC024029

Toll Free : 1800 258 5555 | 7340010333 | [facebook.com/ResonanceEdu](https://www.facebook.com/ResonanceEdu) | twitter.com/ResonanceEdu | www.youtube.com/resowatch | blog.resonance.ac.in

24 The number of elements in the set $S = \{\theta \in [-4\pi, 4\pi] : 3 \cos^2 2\theta + 6 \cos 2\theta - 10 \cos^2 \theta + 5 = 0\}$ is _____.

NTA Ans. 32

Reso Ans.

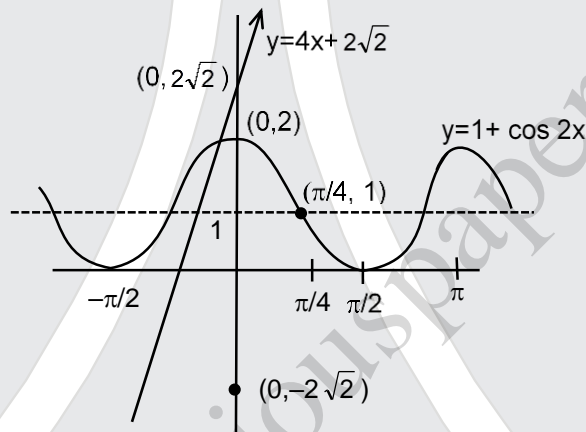
25 The number of solutions of the equation $2\theta - \cos^2 \theta + \sqrt{2} = 0$ in \mathbb{R} is equal to _____.

NTA Ans. 1

Reso Ans. 1

Sol. $4\theta - (1 + \cos 2\theta) + 2\sqrt{2} = 0$

$$1 + \cos 2\theta = 4\theta + 2\sqrt{2}$$



by graph clearly only one solution

26 $50 \tan \left(3 \tan^{-1} \left(\frac{1}{2} \right) + 2 \cos^{-1} \left(\frac{1}{\sqrt{5}} \right) \right) + 4\sqrt{2} \tan \left(\frac{1}{2} \tan^{-1} (2\sqrt{2}) \right)$ is equal to _____.

NTA Ans. 29

Reso Ans. 29

27 Let $c, k \in \mathbb{R}$. If $f(x) = (c+1)x^c + (1-c^c)x + 2k$ and $f(x+y) = f(x) + f(y) - xy$, for all $x, y \in \mathbb{R}$, the value of $|2(f(1) + f(2) + f(3) + \dots + f(20))|$ is equal to _____.

NTA Ans. 3395

Reso Ans. 3395

Resonance Eduventures Ltd.

Reg. Office & Corp. Office : CG Tower, A-46 & 52, IPIA, Near City Mall, Jhalawar Road, Kota (Raj.) - 324005

Ph. No.: +91-744-2777777, 2777700 | FAX No. : +91-022-39167222

To Know more : sms RESO at 56677 | Website : www.resonance.ac.in | E-mail : contact@resonance.ac.in | CIN : U80302RJ2007PLC024029

Toll Free : 1800 258 5555 | 7340010333 | [facebook.com/ResonanceEdu](https://www.facebook.com/ResonanceEdu) | twitter.com/ResonanceEdu | www.youtube.com/resowatch | blog.resonance.ac.in

28

Let $H: \frac{x^2}{a^2} - \frac{y^2}{b^2} = 1, a > 0, b > 0$, be a hyperbola such that the sum of lengths of the transverse and the conjugate axes is $4(2\sqrt{2} + \sqrt{14})$. If the eccentricity of H is $\frac{\sqrt{11}}{2}$, then the value of $a^2 + b^2$ is equal to _____.

NTA Ans. 88

Reso Ans. 88

Sol.

$$e^2 = 1 + \frac{b^2}{a^2} \Rightarrow \frac{11}{4} = 1 + \frac{b^2}{a^2}$$

$$\Rightarrow 7a^2 = 4b^2$$

$$\Rightarrow b^2 = \frac{7}{4}a^2 \quad \dots\dots\dots(1)$$

So hyperbola is $\frac{x^2}{a^2} - \frac{y^2}{\left(\frac{7}{4}a^2\right)} = 1$

Sum of lengths of transverse axis and conjugate axis

$$\Rightarrow 2a + \sqrt{7}a = (2\sqrt{2} + \sqrt{14})4$$

$$(2 + \sqrt{7})a = 4\sqrt{2}(2 + \sqrt{7})$$

$$\Rightarrow a = 4\sqrt{2}$$

and $b^2 = 56$

Hence $a^2 + b^2 = 32 + 56 = 88$

29

Let $P_1 : \vec{r} \cdot (2\hat{i} + \hat{j} - 3\hat{k}) = 4$ be a plane. Let P_2 be another plane which passes through the points $(2, -3, 2), (2, -2, -3)$ and $(1, -4, 2)$. If the direction ratios of the line of intersection of P_1 and P_2 be $16, \alpha, \beta$, then the value of $\alpha + \beta$ is equal to _____.

NTA Ans. 28

Reso Ans. 28

30

Let $b_1 b_2 b_3 b_4$ be a 4-element permutation with $b_i \in \{1, 2, 3, \dots, 100\}$ for $1 \leq i \leq 4$ and $b_i \neq b_j$ for $i \neq j$, such that either b_1, b_2, b_3 are consecutive integers or b_2, b_3, b_4 are consecutive integers. Then the number of such permutations $b_1 b_2 b_3 b_4$ is equal to _____.

NTA Ans. 18915

Reso Ans. 18915

Resonance Eduventures Ltd.

Reg. Office & Corp. Office : CG Tower, A-46 & 52, IPIA, Near City Mall, Jhalawar Road, Kota (Raj.) - 324005

Ph. No.: +91-744-2777777, 2777700 | FAX No. : +91-022-39167222

To Know more : sms RESO at 56677 | Website : www.resonance.ac.in | E-mail : contact@resonance.ac.in | CIN : U80302RJ2007PLC024029

Toll Free : 1800 258 5555 |  7340010333 |  facebook.com/ResonanceEdu |  twitter.com/ResonanceEdu |  www.youtube.com/resowatch |  blog.resonance.ac.in

Numbers that Inspire Students to **EXCEL**

Trust of 9,50,000+ STUDENTS*	Total Selections 1,78,546 JEE (Main) + Eligibility for JEE (Adv.) + NEET UG	AIRs in TOP-100 350 JEE (Main) + JEE (Adv.) + NEET UG	Pool of 800+ FACULTY	Study Centres in 70+ CITIES
---	---	--	-----------------------------------	--

*Since 2001 | **Students Qualified from JEE (Main) to JEE (Advanced) since 2012 | Total Selections in AIR in TOP-100 mentioned are in JEE (Adv.) / JEE (Main) since 2002, JEE (Main) / AIEEE (since 2005), NEET (UG) / APMT (since 2012) | AIR: All India Rank

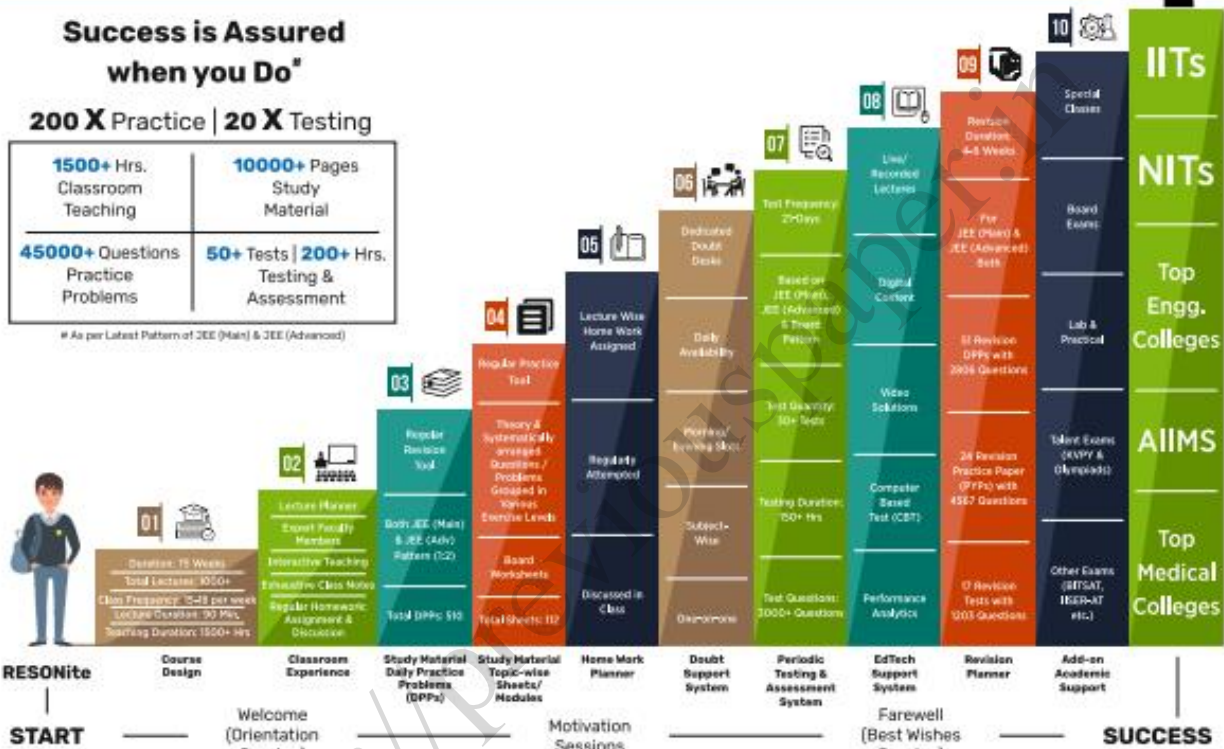
The 10-Building Blocks of **Proven & Trusted Teaching Methodology** @ Resonance

**Success is Assured
when you Do***

200 X Practice | 20 X Testing

1500+ Hrs. Classroom Teaching	10000+ Pages Study Material
45000+ Questions Practice Problems	50+ Tests 200+ Hrs. Testing & Assessment

* As per Latest Pattern of JEE (Main) & JEE (Advanced)



The figures (approx.) shown in the graph are of 2 Years Classroom Program (VIKAAS-XI & VIETA-XII) for JEE (Advanced) @ Resonance in Academic Session 2021-22. The figures vary for JEE (Main), NEET (UG) and Other Courses.

The Strong Faculty Team at Resonance Kota to deliver this successful Teaching Methodology



Photo Taken on 20th June 2022 | Some Faculty Members were not present in the Photo Session.

SCHOLARSHIP UPTO

100%

Based on JEE (Main) 2022 NTA Score (Percentile) & Scholarship Test (ResoNET)

Admission Announcement: 2022-23 | Class: 5 to 12 & 12+

ResoNET 3rd & 10th July
Resonance National Entrance Test

Target: JEE (Advanced) | JEE (Main) | NEET (UG)
Pre-Foundation (V to X) | Board

Polish your subject knowledge to Shine in JEE (Advanced) 2022 with the guidance of HODs & Top Notch Sr. Faculty of Resonance

SPARK 7 WEEKS COMPACT COURSE OFFLINE / ONLINE

from 4th July 2022

Scholarship upto 90%

Resonance Eduventures Ltd.

Follow us at

Kota Study Centre & Registered Corporate Office:
CG Tower, A-46 & 52, IPHA, Near City Mall,
Jhalawar Road, Kota (Raj.) - 324005

Tel No.: 0744-2777777, 2777700
Toll Free: 1800 258 5555 | CIN: U80302RJ2007PLC024029
e-mail: contact@resonance.ac.in | visit: www.resonance.ac.in



Resonance[®]
Educating for better tomorrow

JEE

(Main)

PAPER-1 (B.E./B. TECH.)

2022

COMPUTER BASED TEST (CBT) Questions & Solutions

Date: 29 June, 2022 (SHIFT-1) | TIME : (9.00 a.m. to 12.00 p.m)

Duration: 3 Hours | Max. Marks: 300

SUBJECT: CHEMISTRY

Resonance Eduventures Ltd.

Reg. Office & Corp. Office : CG Tower, A-46 & 52, IPIA, Near City Mall, Jhalawar Road, Kota (Raj.) - 324005

Ph. No.: +91-744-2777777, 2777700 | FAX No. : +91-022-39167222

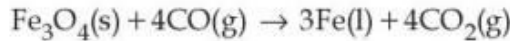
To Know more : sms RESO at 56677 | Website : www.resonance.ac.in | E-mail : contact@resonance.ac.in | CIN : U80302RJ2007PLC024029

Toll Free : 1800 258 5555  7340010333  facebook.com/ResonanceEdu  twitter.com/ResonanceEdu  www.youtube.com/resowatch  blog.resonance.ac.in

This solution was download from Resonance JEE (MAIN) 2022 Solution portal

PART : CHEMISTRY

1 Production of iron in blast furnace follows the following equation

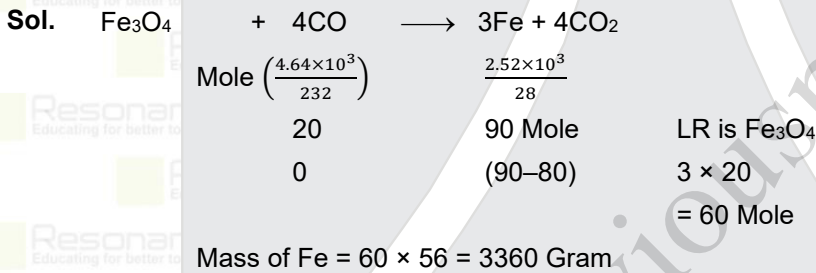


when 4.640 kg of Fe_3O_4 and 2.520 kg of CO are allowed to react then the amount of iron (in g) produced is :

[Given : Molar Atomic mass (g mol^{-1}) : $\text{Fe} = 56$
Molar Atomic mass (g mol^{-1}) : $\text{O} = 16$
Molar Atomic mass (g mol^{-1}) : $\text{C} = 12$]

- A 1400
- B 2200
- C 3360
- D 4200

Ans. (C)



Resonance Eduventures Ltd.

Reg. Office & Corp. Office : CG Tower, A-46 & 52, IPIA, Near City Mall, Jhalawar Road, Kota (Raj.) - 324005

Ph. No.: +91-744-2777777, 2777700 | FAX No. : +91-022-39167222

To Know more : sms RESO at 56677 | Website : www.resonance.ac.in | E-mail : contact@resonance.ac.in | CIN : U80302RJ2007PLC024029

Toll Free : 1800 258 5555 | 7340010333 | [facebook.com/ResonanceEdu](https://www.facebook.com/ResonanceEdu) | twitter.com/ResonanceEdu | www.youtube.com/resowatch | blog.resonance.ac.in

2 Which of the following statements are correct ?

- (A) The electronic configuration of Cr is $[\text{Ar}] 3d^5 4s^1$.
- (B) The magnetic quantum number may have a negative value.
- (C) In the ground state of an atom, the orbitals are filled in order of their increasing energy.
- (D) The total number of nodes are given by $n - 2$.

Choose the most appropriate answer from the options given below :

- A (A), (C) and (D) only
- B (A) and (B) only
- C (A) and (C) only
- D (A), (B) and (C) only

Ans. (D)

Sol. Total number of nodes are $(n - 1)$.

3 Arrange the following in the decreasing order of their covalent character :

- (A) LiCl
- (B) NaCl
- (C) KCl
- (D) CsCl

Choose the most appropriate answer from the options given below :

- A $(A) > (C) > (B) > (D)$
- B $(B) > (A) > (C) > (D)$
- C $(A) > (B) > (C) > (D)$
- D $(A) > (B) > (D) > (C)$

Ans. (C)






Sol. On moving down the group covalent character is decreasing.

Resonance Eduventures Ltd.

Reg. Office & Corp. Office : CG Tower, A-46 & 52, IPIA, Near City Mall, Jhalawar Road, Kota (Raj.) - 324005

Ph. No.: +91-744-2777777, 2777700 | FAX No. : +91-022-39167222

To Know more : sms RESO at 56677 | Website : www.resonance.ac.in | E-mail : contact@resonance.ac.in | CIN : U80302RJ2007PLC024029

Toll Free : 1800 258 5555  7340010333  facebook.com/ResonanceEdu  twitter.com/ResonanceEdu  www.youtube.com/resowatch  blog.resonance.ac.in

4 The solubility of AgCl will be maximum in which of the following ?

- A 0.01 M KCl
- B 0.01 M HCl
- C 0.01 M AgNO₃
- D Deionised water

Ans. (D)

Sol. In KCl, HCl and AgNO₃ solubility decrease due to common ion effect so solubility maximum in deionised water

5 Question: Which of the following is a correct statement ?

- A Brownian motion destabilises sols.
- B Any amount of dispersed phase can be added to emulsion without destabilising it.
- C Mixing two oppositely charged sols in equal amount neutralises charges and stabilises colloids.
- D Presence of equal and similar charges on colloidal particles provides stability to the colloidal solution.

Ans. (D)

Sol. Similar charge on colloidal particle makes the sol stable

6 Question: The electronic configuration of Pt (atomic number 78) is :

- A [Xe] 4f¹⁴ 5d⁹ 6s¹
- B [Kr] 4f¹⁴ 5d¹⁰
- C [Xe] 4f¹⁴ 5d¹⁰
- D [Xe] 4f¹⁴ 5d⁸ 6s²

Ans. (A)

Sol. Pt (Z = 78) = [Xe] 4f¹⁴ 5d⁹ 6s¹

Resonance Eduventures Ltd.

Reg. Office & Corp. Office : CG Tower, A-46 & 52, IPIA, Near City Mall, Jhalawar Road, Kota (Raj.) - 324005

Ph. No.: +91-744-2777777, 2777700 | FAX No. : +91-022-39167222

To Know more : sms RESO at 56677 | Website : www.resonance.ac.in | E-mail : contact@resonance.ac.in | CIN : U80302RJ2007PLC024029

Toll Free : 1800 258 5555 | 7340010333 | [facebook.com/ResonanceEdu](https://www.facebook.com/ResonanceEdu) | twitter.com/ResonanceEdu | www.youtube.com/resowatch | blog.resonance.ac.in

7 In isolation of which one of the following metals from their ores, the use of cyanide salt commonly involved ?

- A Zinc
- B Gold
- C Silver
- D Copper

Ans. (D)

Sol. Chief extraction of Cu is, CuFeS_2 . In it self reduction is involved.

8 Which one of the following reactions indicates the reducing ability of hydrogen peroxide in basic medium ?

- A $\text{HOCl} + \text{H}_2\text{O}_2 \rightarrow \text{H}_3\text{O}^+ + \text{Cl}^- + \text{O}_2$
- B $\text{PbS} + 4\text{H}_2\text{O}_2 \rightarrow \text{PbSO}_4 + 4\text{H}_2\text{O}$
- C $2\text{MnO}_4^- + 3\text{H}_2\text{O}_2 \rightarrow 2\text{MnO}_2 + 3\text{O}_2 + 2\text{H}_2\text{O} + 2\text{OH}^-$
- D $\text{Mn}^{2+} + \text{H}_2\text{O}_2 \rightarrow \text{Mn}^{4+} + 2\text{OH}^-$

Ans. (C)

Sol. $\text{MnO}_4^- + \text{H}_2\text{O}_2 \rightarrow \text{MnO}_2 + \text{O}_2 + \text{OH}^-$
Oxidising agent Reducing agent (alkaline Medium)

Resonance Eduventures Ltd.

Reg. Office & Corp. Office : CG Tower, A-46 & 52, IPIA, Near City Mall, Jhalawar Road, Kota (Raj.) - 324005

Ph. No.: +91-744-2777777, 2777700 | FAX No. : +91-022-39167222

To Know more : sms RESO at 56677 | Website : www.resonance.ac.in | E-mail : contact@resonance.ac.in | CIN : U80302RJ2007PLC024029

Toll Free : 1800 258 5555 | 7340010333 | [facebook.com/ResonanceEdu](https://www.facebook.com/ResonanceEdu) | twitter.com/ResonanceEdu | www.youtube.com/resowatch | blog.resonance.ac.in

9

Match List - I with List - II.

List - I

List - II

(Metal)

(Emitted light wavelength (nm))

- | | |
|--------|-------------|
| (A) Li | (I) 670.8 |
| (B) Na | (II) 589.2 |
| (C) Rb | (III) 780.0 |
| (D) Cs | (IV) 455.5 |

Question: Choose the most appropriate answer from the options given below :

- A** (A)-(I), (B)-(II), (C)-(III), (D)-(IV)
- B** (A)-(III), (B)-(II), (C)-(I), (D)-(IV)
- C** (A)-(III), (B)-(I), (C)-(II), (D)-(IV)
- D** (A)-(IV), (B)-(II), (C)-(I), (D)-(III)

Ans. (A)

Sol.

Metal	Li	Na	K	Rb	Cs
Colour	Crimson red	Yellow	Violet / Lilac	Red violet	Blue
Wave length (λ (nm))	670.8	589.2	766.5	766.5	766.5

Resonance Eduventures Ltd.

Reg. Office & Corp. Office : CG Tower, A-46 & 52, IPIA, Near City Mall, Jhalawar Road, Kota (Raj.) - 324005

Ph. No.: +91-744-2777777, 2777700 | FAX No. : +91-022-39167222

To Know more : sms RESO at 56677 | Website : www.resonance.ac.in | E-mail : contact@resonance.ac.in | CIN : U80302RJ2007PLC024029

Toll Free : 1800 258 5555  7340010333  facebook.com/ResonanceEdu  twitter.com/ResonanceEdu  www.youtube.com/resowatch  blog.resonance.ac.in

10

Match List - I with List - II.

List - I

List - II

(Metal)

(Application)

- | | |
|--------|----------------------------------|
| (A) Cs | (I) High temperature thermometer |
| (B) Ga | (II) Water repellent sprays |
| (C) B | (III) Photoelectric cells |
| (D) Si | (IV) Bullet proof vest |

Choose the most appropriate answer from the options given below :

Question:

- A (A)-(III), (B)-(I), (C)-(IV), (D)-(II)
- B (A)-(IV), (B)-(III), (C)-(II), (D)-(I)
- C (A)-(II), (B)-(III), (C)-(IV), (D)-(I)
- D (A)-(I), (B)-(IV), (C)-(II), (D)-(III)

Ans. (A)

Sol. These are main use of given elements.

11

The oxoacid of phosphorus that is easily obtained from a reaction of alkali and white phosphorus and has two P-H bonds, is :

- A Phosphonic acid
- B Phosphinic acid
- C Pyrophosphorus acid
- D Hypophosphoric acid

Ans. (B)

Sol. P_4 (White) + Conc. NaOH \rightarrow NaH_2PO_2 + PH_3

↓

 H_3PO_2






Phosphinic acid

Resonance Eduventures Ltd.

Reg. Office & Corp. Office : CG Tower, A-46 & 52, IPIA, Near City Mall, Jhalawar Road, Kota (Raj.) - 324005

Ph. No.: +91-744-2777777, 2777700 | FAX No. : +91-022-39167222

To Know more : sms RESO at 56677 | Website : www.resonance.ac.in | E-mail : contact@resonance.ac.in | CIN : U80302RJ2007PLC024029

Toll Free : 1800 258 5555  7340010333  facebook.com/ResonanceEdu  twitter.com/ResonanceEdu  www.youtube.com/resowatch  blog.resonance.ac.in

12 The acid that is believed to be mainly responsible for the damage of Taj Mahal is

Question:

- A sulfuric acid.
- B hydrofluoric acid.
- C phosphoric acid.
- D hydrochloric acid.

Ans. (A)

Sol. The acid rain reacts with marble, CaCO_3 of Taj Mahal



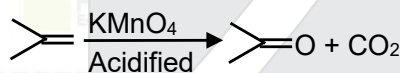
causing damage to this wonderful monument that has attracted people from around the world. As a result, the monument is being slowly disfigured and the marble is getting discoloured and lustreless.

13 Two isomers 'A' and 'B' with molecular formula C_4H_8 give different products on oxidation with KMnO_4 in acidic medium. Isomer 'A' on reaction with KMnO_4/H^+ results in effervescence of a gas and gives ketone. The compound 'A' is

- A But-1-ene.
- B cis-But-2-ene.
- C trans-But-2-ene.
- D 2-methyl propene.

Ans. (D)

Sol.



Resonance Eduventures Ltd.

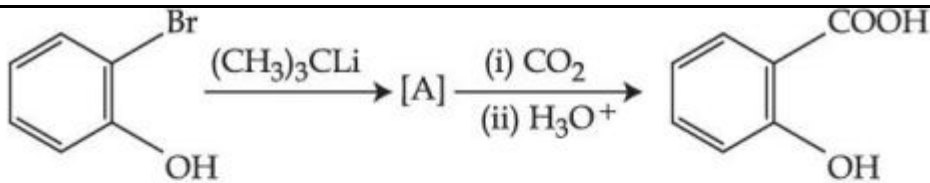
Reg. Office & Corp. Office : CG Tower, A-46 & 52, IPIA, Near City Mall, Jhalawar Road, Kota (Raj.) - 324005

Ph. No.: +91-744-2777777, 2777700 | FAX No. : +91-022-39167222

To Know more : sms RESO at 56677 | Website : www.resonance.ac.in | E-mail : contact@resonance.ac.in | CIN : U80302RJ2007PLC024029

Toll Free : 1800 258 5555 | 7340010333 | [facebook.com/ResonanceEdu](https://www.facebook.com/ResonanceEdu) | twitter.com/ResonanceEdu | www.youtube.com/resowatch | blog.resonance.ac.in

14

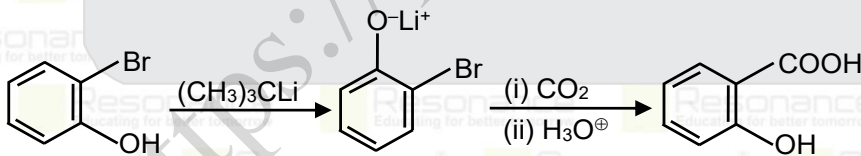


Question: In the given conversion the compound A is :

- A
- B
- C
- D

Ans. (B)

Sol.



Resonance Eduventures Ltd.

Reg. Office & Corp. Office : CG Tower, A-46 & 52, IPIA, Near City Mall, Jhalawar Road, Kota (Raj.) - 324005

Ph. No.: +91-744-2777777, 2777700 | FAX No. : +91-022-39167222

To Know more : sms RESO at 56677 | Website : www.resonance.ac.in | E-mail : contact@resonance.ac.in | CIN : U80302RJ2007PLC024029

Toll Free : 1800 258 5555 7340010333 facebook.com/ResonanceEdu twitter.com/ResonanceEdu www.youtube.com/resovatch blog.resonance.ac.in

15 Given below are two statements :

Statement I : The esterification of carboxylic acid with an alcohol is a nucleophilic acyl substitution.

Statement II : Electron withdrawing groups in the carboxylic acid will increase the rate of esterification reaction.

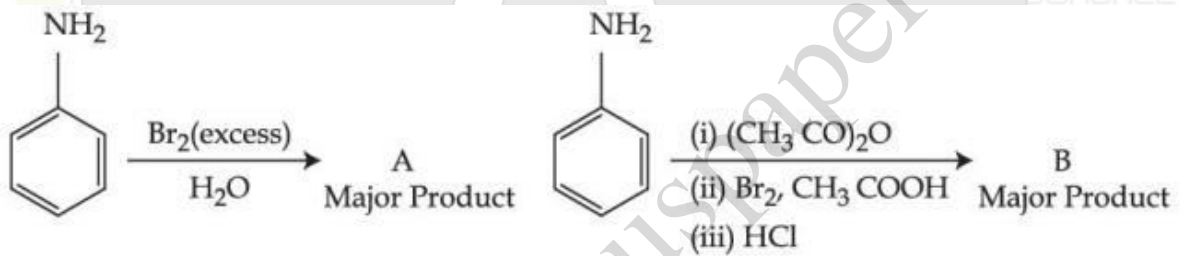
Choose the most appropriate option :

- A Both Statement I and Statement II are correct.
- B Both Statement I and Statement II are incorrect.
- C Statement I is correct but Statement II is incorrect.
- D Statement I is incorrect but Statement II is correct.

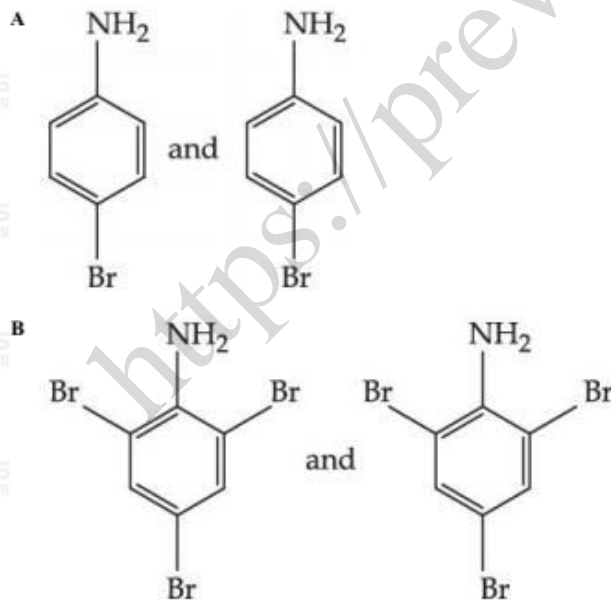
Ans. (A)

Sol. Both statement-I & II are correct.

16



Consider the above reactions, the product A and product B respectively are



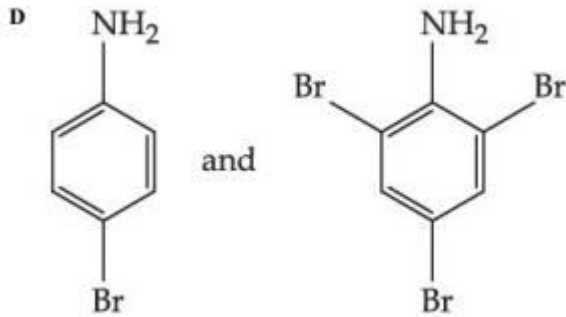
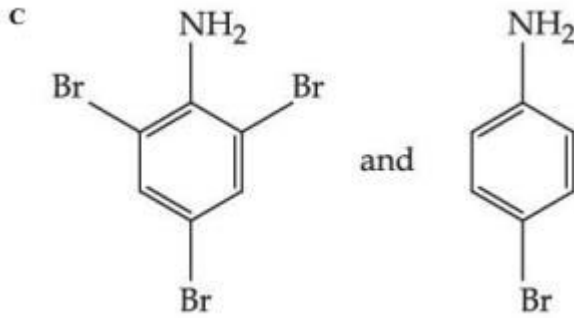
Resonance Eduventures Ltd.

Reg. Office & Corp. Office : CG Tower, A-46 & 52, IPIA, Near City Mall, Jhalawar Road, Kota (Raj.) - 324005

Ph. No.: +91-744-2777777, 2777700 | FAX No. : +91-022-39167222

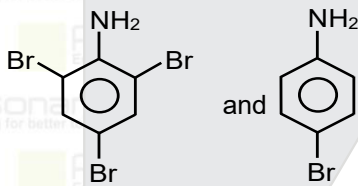
To Know more : sms RESO at 56677 | Website : www.resonance.ac.in | E-mail : contact@resonance.ac.in | CIN : U80302RJ2007PLC024029

Toll Free : 1800 258 5555 7340010333 facebook.com/ResonanceEdu twitter.com/ResonanceEdu www.youtube.com/resowatch blog.resonance.ac.in



Ans. (C)

Sol.



17

The polymer, which can be stretched and retains its original status on releasing the force is

- A Bakelite.
- B Nylon 6,6.
- C Buna-N.
- D Terylene.

Ans. (C)

Sol.

In elastomeric polymers, the polymer chains are held together by the weakest intermolecular forces. These weak binding forces permit the polymer to be stretched. A few 'crosslinks' are introduced in between the chains, which help the polymer to retract to its original position after the force is released as in vulcanised rubber. The examples are buna-S, buna-N, neoprene, etc.

Resonance Eduventures Ltd.

Reg. Office & Corp. Office : CG Tower, A-46 & 52, IPIA, Near City Mall, Jhalawar Road, Kota (Raj.) - 324005

Ph. No.: +91-744-2777777, 2777700 | FAX No. : +91-022-39167222

To Know more : sms RESO at 56677 | Website : www.resonance.ac.in | E-mail : contact@resonance.ac.in | CIN : U80302RJ2007PLC024029

Toll Free : 1800 258 5555 | WhatsApp : 7340010333 | Facebook : facebook.com/ResonanceEdu | Twitter : twitter.com/ResonanceEdu | YouTube : www.youtube.com/resowatch | Blog : blog.resonance.ac.in

18

Question: Sugar moiety in DNA and RNA molecules respectively are

- A β -D-2-deoxyribose, β -D-deoxyribose.
- B β -D-2-deoxyribose, β -D-ribose
- C β -D-ribose, β -D-2-deoxyribose.
- D β -D-deoxyribose, β -D-2-deoxyribose.

Ans. (B)

Sol. The sugar found in polynucleotides is either ribose (a monosaccharide pentose) or 2' deoxyribose. A nucleic acid containing deoxyribose is called deoxyribonucleic acid (DNA) while that which contains ribose is called ribonucleic acid (RNA).

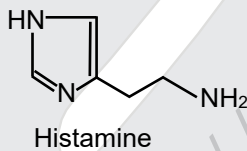
19

Question: Which of the following compound does not contain sulfur atom ?

- A Cimetidine
- B Ranitidine
- C Histamine
- D Saccharin

Ans. (C)

Sol. It is fact.



Resonance Eduventures Ltd.

Reg. Office & Corp. Office : CG Tower, A-46 & 52, IPIA, Near City Mall, Jhalawar Road, Kota (Raj.) - 324005

Ph. No.: +91-744-2777777, 2777700 | FAX No. : +91-022-39167222

To Know more : sms RESO at 56677 | Website : www.resonance.ac.in | E-mail : contact@resonance.ac.in | CIN : U80302RJ2007PLC024029

Toll Free : 1800 258 5555 | 7340010333 | [facebook.com/ResonanceEdu](https://www.facebook.com/ResonanceEdu) | twitter.com/ResonanceEdu | www.youtube.com/resovatch | blog.resonance.ac.in

20 Given below are two statements.

Statement I : Phenols are weakly acidic.

Statement II : Therefore they are freely soluble in NaOH solution and are weaker acids than alcohols and water.

Choose the most appropriate option :

- A Both Statement I and Statement II are correct.
 B Both Statement I and Statement II are incorrect.
 C Statement I is correct but Statement II is incorrect.
 D Statement I is incorrect but Statement II is correct.

Ans. (C)

Sol. Phenol is stronger acid than alcohol and water but weakest acid then organic and mineral acids.

21 Geraniol, a volatile organic compound, is a component of rose oil. The density of the vapour is 0.46 g L^{-1} at 257°C and 100 mm Hg . The molar mass of geraniol is _____ g mol^{-1} . (Nearest Integer)

[Given : $R = 0.082 \text{ L atm K}^{-1} \text{ mol}^{-1}$]

Ans. 152

Sol. $P = \frac{dRT}{M}$ (Litre ATM unit system)

$$\frac{100}{760} = \frac{0.46 \times 0.082 \times 530}{M}$$

$$M = 151.93 \text{ gram/mole} \approx 152$$

22 17.0 g of NH_3 completely vapourises at -33.42°C and 1 bar pressure and the enthalpy change in the process is 23.4 kJ mol^{-1} . The enthalpy change for the vapourisation of 85 g of NH_3 under the same conditions is _____ kJ .

Ans. 117

Sol. ΔH_{vap} of 17 gram of $\text{NH}_3 = 23.4 \text{ gram}$

$$\Delta H_{\text{vap}} \text{ of } 85 \text{ gram of } \text{NH}_3 = \left[\frac{23.4}{17} \times 85 \right]$$






$$= 23.4 \times 5 = 117 \text{ kJ}$$

Resonance Eduventures Ltd.

Reg. Office & Corp. Office : CG Tower, A-46 & 52, IPIA, Near City Mall, Jhalawar Road, Kota (Raj.) - 324005

Ph. No.: +91-744-2777777, 2777700 | FAX No. : +91-022-39167222

To Know more : sms RESO at 56677 | Website : www.resonance.ac.in | E-mail : contact@resonance.ac.in | CIN : U80302RJ2007PLC024029

Toll Free : 1800 258 5555  7340010333  facebook.com/ResonanceEdu  twitter.com/ResonanceEdu  www.youtube.com/resowatch  blog.resonance.ac.in

- 23 1.2 mL of acetic acid is dissolved in water to make 2.0 L of solution. The depression in freezing point observed for this strength of acid is 0.0198°C . The percentage of dissociation of the acid is _____. (Nearest integer)

[Given: Density of acetic acid is 1.02 g mL^{-1}

Molar mass of acetic acid is 60 g mol^{-1}

$K_f(\text{H}_2\text{O}) = 1.85 \text{ K kg mol}^{-1}$]

Ans. 5

Sol. Mass of $\text{CN}_3\text{COOH} = dV = 1.02 \times 1.2$

$$= 1.224 \text{ gram}$$

$$\text{Molality of } \text{CH}_3\text{COOH} \text{ solution} = \left(\frac{1.224}{60 \times 2}\right)$$

$$\Delta T_b = i k_f \times m$$

$$0.0198 = i \times 1.85 \left(\frac{1.224}{60 \times 2}\right)$$

$$i = 1.0493$$

$$i = 1 + (n - 1)\alpha$$

$$1.0493 = 1 + (2 - 1)\alpha$$

$$\alpha = 0.0493$$

$$\% \alpha = 4.93 \approx 5$$


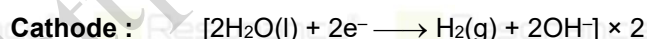
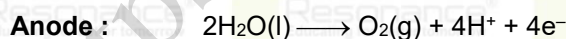
- 24 A dilute solution of sulphuric acid is electrolysed using a current of 0.10 A for 2 hours to produce hydrogen and oxygen gas. The total volume of gases produced at STP is _____ cm^3 . (Nearest integer)

[Given: Faraday constant $F = 96500 \text{ C mol}^{-1}$ at STP, molar volume of an ideal gas is 22.7 L mol^{-1}]

Ans. 127

Sol. Charge = $q = it = 0.1 \times 2 \times 60 \times 60$

$$= 720 \text{ C}$$



$4F$ charge produced = 3 mole gas

$$\left(\frac{720}{96500}\right)F \text{ charge produced} = \left(\frac{3}{4} \times \frac{720}{96500}\right) \text{ mole} = \frac{3 \times 18}{9650} \text{ mole}$$

$$\text{Volume of gas (at NTP)} = \frac{54}{9650} \times 22.7 = 0.127 \text{ lit.} = 127 \text{ ml}$$

Resonance Eduventures Ltd.

Reg. Office & Corp. Office : CG Tower, A-46 & 52, IPIA, Near City Mall, Jhalawar Road, Kota (Raj.) - 324005

Ph. No.: +91-744-2777777, 2777700 | FAX No. : +91-022-39167222

To Know more : sms RESO at 56677 | Website : www.resonance.ac.in | E-mail : contact@resonance.ac.in | CIN : U80302RJ2007PLC024029

Toll Free : 1800 258 5555 | 7340010333 | [facebook.com/ResonanceEdu](https://www.facebook.com/ResonanceEdu) | twitter.com/ResonanceEdu | www.youtube.com/resowatch | blog.resonance.ac.in

- 25 The activation energy of one of the reactions in a biochemical process is $532611 \text{ J mol}^{-1}$. When the temperature falls from 310 K to 300 K, the change in rate constant observed is $k_{300} = x \times 10^{-3} k_{310}$. The value of x is _____.
- [Given: $\ln 10 = 2.3$
 $R = 8.3 \text{ J K}^{-1} \text{ mol}^{-1}$]

Ans. 1

Sol. $\ln\left(\frac{k_{310}}{k_{300}}\right) = \frac{Ea}{R} \left(\frac{1}{300} - \frac{1}{310}\right)$

$$= \frac{532611}{8.3} \left(\frac{10}{300 \times 310}\right) = 6.9$$

$$\ln\left(\frac{k_{310}}{k_{300}}\right) = 6.9$$

$$\ln\left(\frac{k_{310}}{k_{300}}\right) = 2.3 \times 3$$

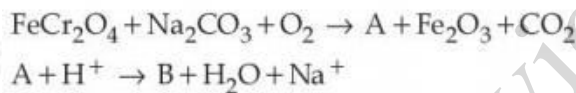
$$\ln\left(\frac{k_{310}}{k_{300}}\right) = 3 \ln(10)$$

$$\left(\frac{k_{310}}{k_{300}}\right) = 10^3$$

$$k_{300} = 1 \times 10^{-3} k_{310}$$

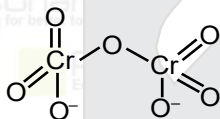
So $X = 1$

- 26 The number of terminal oxygen atoms present in the product B obtained from the following reaction is _____.



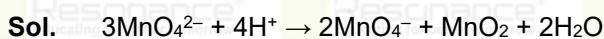
Ans. 6

Sol. $\text{A} = \text{Na}_2\text{CrO}_4$, $\text{B} = \text{Cr}_2\text{O}_7^{2-}$



- 27 An acidified manganate solution undergoes disproportionation reaction. The spin-only magnetic moment value of the product having manganese in higher oxidation state is _____ B.M. (Nearest integer)

Ans. 0



$${}_{25}\text{Mn}^{7+} = 3d^0 \quad \text{unpaired electron} = 0$$

$$\mu(\text{spin only}) = 0$$

Resonance Eduventures Ltd.

Reg. Office & Corp. Office : CG Tower, A-46 & 52, IPIA, Near City Mall, Jhalawar Road, Kota (Raj.) - 324005

Ph. No.: +91-744-2777777, 2777700 | FAX No. : +91-022-39167222

To Know more : sms RESO at 56677 | Website : www.resonance.ac.in | E-mail : contact@resonance.ac.in | CIN : U80302RJ2007PLC024029

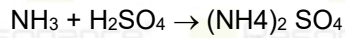
Toll Free : 1800 258 5555 | 7340010333 | [facebook.com/ResonanceEdu](https://www.facebook.com/ResonanceEdu) | twitter.com/ResonanceEdu | www.youtube.com/resowatch | blog.resonance.ac.in

- 28 Kjeldahl's method was used for the estimation of nitrogen in an organic compound. The ammonia evolved from 0.55 g of the compound neutralised 12.5 mL of 1 M H₂SO₄ solution. The percentage of nitrogen in the compound is _____. (Nearest integer)

Ans. (64)

Sol. Organic compound → NH₃(g)

0.55 g



VF = 1 VF = 2

Eq. of NH₃ = eq. of H₂SO₄

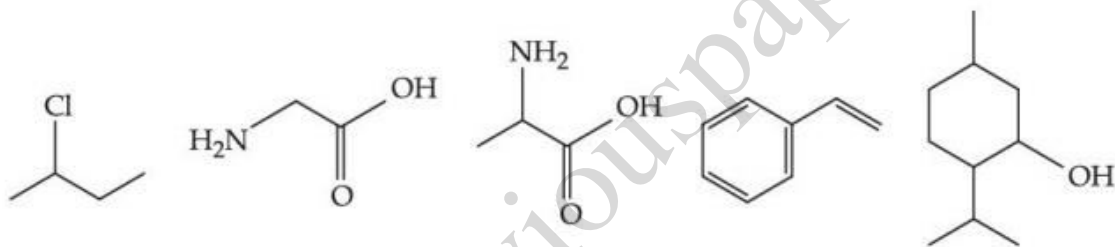
$$1(n_{\text{NH}_3}) = 2 [1 \times 12.5] \times 10^{-3}$$

$$n_{\text{Nitrogen}} = 2 \times 12.5 \times 10^{-3}$$

$$W_{\text{Nitrogen}} = [14 \times 2 \times 12.5] \times 10^{-3} \text{ gram} = 35 \times 10^{-2} \text{ gram}$$

$$\% \text{ of Nitrogen} = \frac{35 \times 10^{-2}}{55 \times 10^{-2}} \times 100 = 63.636\% \approx 64\%$$

- 29 Observe structures of the following compounds

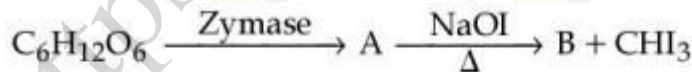


The total number of structures/compounds which possess asymmetric carbon atoms is _____.

Ans. (3)

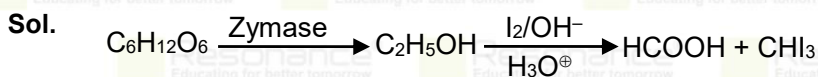
Sol. Structure (i), (iii), (v) have asymmetric carbon.

- 30



Question: The number of carbon atoms present in the product B is _____.

Ans. (1)



Resonance Eduventures Ltd.

Reg. Office & Corp. Office : CG Tower, A-46 & 52, IPIA, Near City Mall, Jhalawar Road, Kota (Raj.) - 324005

Ph. No.: +91-744-2777777, 2777700 | FAX No. : +91-022-39167222

To Know more : sms RESO at 56677 | Website : www.resonance.ac.in | E-mail : contact@resonance.ac.in | CIN : U80302RJ2007PLC024029

Toll Free : 1800 258 5555 | 7340010333 | [facebook.com/ResonanceEdu](https://www.facebook.com/ResonanceEdu) | twitter.com/ResonanceEdu | www.youtube.com/resowatch | blog.resonance.ac.in

Numbers that Inspire Students to **EXCEL**

Trust of
9,50,000+
STUDENTS*

Total Selections
1,78,546
JEE (Main) + Eligibility for
JEE (Adv.) + NEET UG

AIRs in **TOP-100**
350
JEE (Main) + JEE (Adv.)
+ NEET UG

Pool of
800+
FACULTY

Study Centres in
70+
CITIES

*Since 2001 | **Students Qualified from JEE (Main) to JEE (Advanced) since 2012 | Total Selections in AIR in TOP-100 mentioned are in JEE (Adv.) / JEE (Main) / JEE (Advanced) since 2002, JEE (Main) / AIEEE (since 2005), NEET (UG) / APMT (since 2012) | AIR: All India Rank

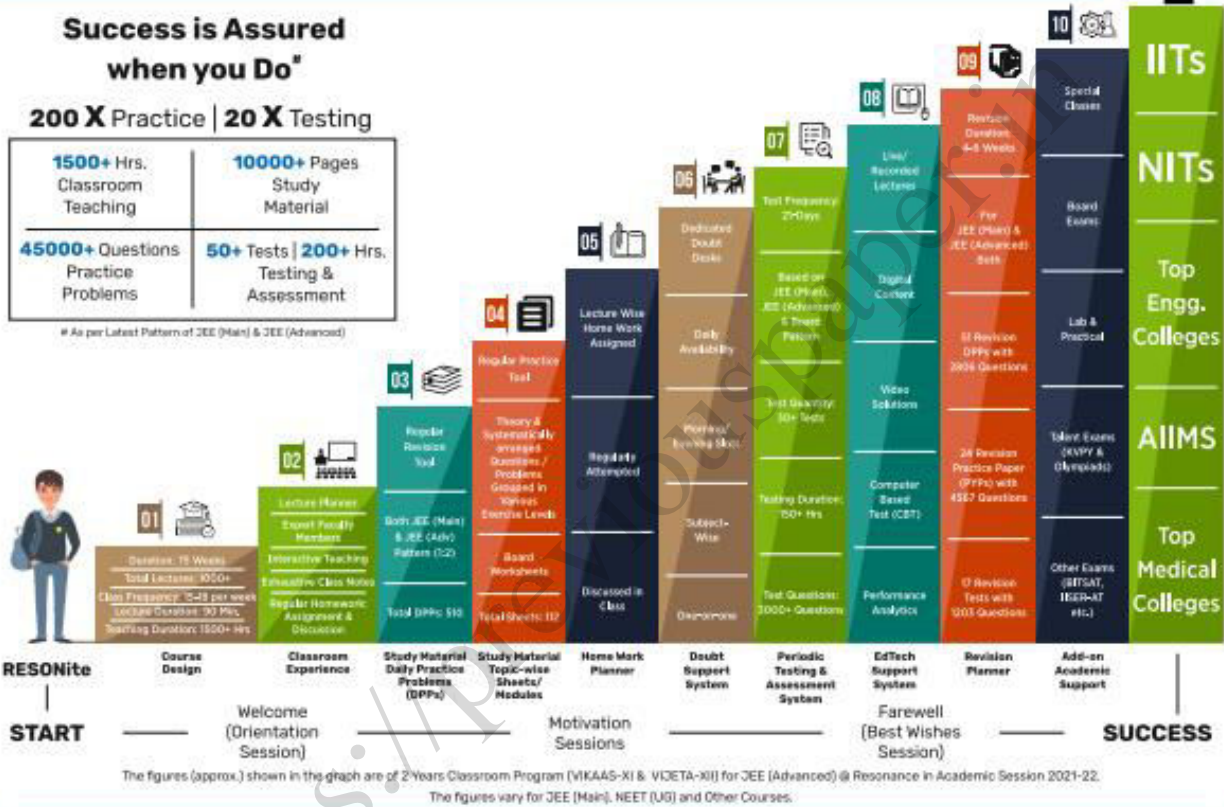
The 10-Building Blocks of **Proven & Trusted Teaching Methodology @ Resonance**

**Success is Assured
when you Do***

200 X Practice | 20 X Testing

1500+ Hrs. Classroom Teaching	10000+ Pages Study Material
45000+ Questions Practice Problems	50+ Tests 200+ Hrs. Testing & Assessment

* As per Latest Pattern of JEE (Main) & JEE (Advanced)



The figures (approx.) shown in the graph are of 2 Years Classroom Program (VIKAAS-XI & VIETA-XII) for JEE (Advanced) @ Resonance in Academic Session 2021-22. The figures vary for JEE (Main), NEET (UG) and Other Courses.

The Strong Faculty Team at Resonance Kota to deliver this successful Teaching Methodology



SCHOLARSHIP UPTO

100%

Based on JEE (Main) 2022 NTA Score (Percentile) & Scholarship Test (ResoNET)

Admission Announcement: 2022-23 | Class: 5 to 12 & 12+

ResoNET 3rd & 10th July

Target: JEE (Advanced) | JEE (Main) | NEET (UG) | Pre-Foundation (V to X) | Board

Polish your subject knowledge to Shine in JEE (Advanced) 2022 with the guidance of HODs & Top Notch Sr. Faculty of Resonance

SPARK 7 WEEKS COMPACT COURSE OFFLINE / ONLINE

from 4th July 2022

Scholarship upto 90%



Resonance[®]
Educating for better tomorrow

JEE

(Main)

PAPER-1 (B.E./B. TECH.)

2022

COMPUTER BASED TEST (CBT) Questions & Solutions

Date: 29 June, 2022 (SHIFT-1) | TIME : (9.00 a.m. to 12.00 p.m)

Duration: 3 Hours | Max. Marks: 300






SUBJECT: PHYSICS

Resonance Eduventures Ltd.

Reg. Office & Corp. Office : CG Tower, A-46 & 52, IPIA, Near City Mall, Jhalawar Road, Kota (Raj.) - 324005

Ph. No.: +91-744-2777777, 2777700 | FAX No. : +91-022-39167222

To Know more : sms RESO at 56677 | Website : www.resonance.ac.in | E-mail : contact@resonance.ac.in | CIN : U80302RJ2007PLC024029

Toll Free : 1800 258 5555  7340010333  facebook.com/ResonanceEdu  twitter.com/ResonanceEdu  www.youtube.com/resowatch  blog.resonance.ac.in

This solution was download from Resonance JEE (MAIN) 2022 Solution portal

PART : PHYSICS

1. Two balls A and B are placed at the top of 180 m tall tower. Ball A is released from the top at $t=0$ s. Ball B is thrown vertically down with an initial velocity 'u' at $t=2$ s. After a certain time, both balls meet 100 m above the ground. Find the value of 'u' in ms^{-1} . [use $g=10 \text{ ms}^{-2}$]:

Question:

A 10

B 15

C 20

D 30

Ans. (D)

Sol. For ball A, $s = 4t + \frac{1}{2}at^2$

$$80 = 0 + \frac{1}{2}(10)t^2 \Rightarrow t = 4 \text{ sec.}$$

For ball B, $S = 4t + \frac{1}{2}at^2$

$$80 = 4(2) + \frac{1}{2}(10)(2)^2 \Rightarrow 4 = 30 \text{ m/sec}$$

2. A body of mass M at rest explodes into three pieces, in the ratio of masses 1 : 1 : 2. Two smaller pieces fly off perpendicular to each other with velocities of 30 ms^{-1} and 40 ms^{-1} respectively. The velocity of the third piece will be:

A 15 ms^{-1}

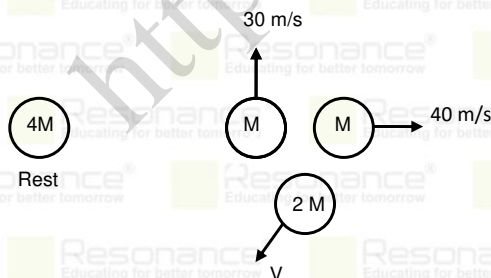
B 25 ms^{-1}

C 35 ms^{-1}

D 50 ms^{-1}

Ans. (B)

Sol.



$$(M \times 30)^2 + (M \times 40)^2 = (2M \times V)^2$$

$$M \times 50 = 2M \times V$$

$$V = 25 \text{ m/s}$$

Resonance Eduventures Ltd.

Reg. Office & Corp. Office : CG Tower, A-46 & 52, IPIA, Near City Mall, Jhalawar Road, Kota (Raj.) - 324005

Ph. No.: +91-744-2777777, 2777700 | FAX No. : +91-022-39167222

To Know more : sms RESO at 56677 | Website : www.resonance.ac.in | E-mail : contact@resonance.ac.in | CIN : U80302RJ2007PLC024029

Toll Free : 1800 258 5555 | 7340010333 | facebook.com/ResonanceEdu | twitter.com/ResonanceEdu | www.youtube.com/resowatch | blog.resonance.ac.in

3. The activity of a radioactive material is 2.56×10^{-3} Ci. If the half life of the material is 5 days, after how many days the activity will become 2×10^{-5} Ci ?

A 30 days

B 35 days

C 40 days

D 25 days

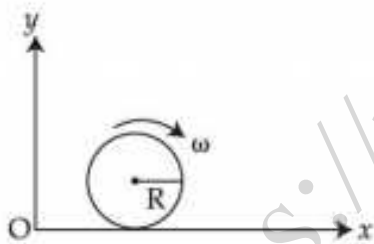
Ans. (B)

Sol. $R = R_0 e^{-\lambda t} = \frac{R_0}{2^{t/t_{1/2}}}$

$$2 \times 10^{-5} = \frac{2.56 \times 10^{-3}}{2^{t/5}}$$

$$\frac{t}{5} = 7; \quad t = 7 \times 5 = 35 \text{ days}$$

4. A spherical shell of 1 kg mass and radius R is rolling with angular speed ω on horizontal plane (as shown in figure). The magnitude of angular momentum of the shell about the origin O is $\frac{a}{3} R^2 \omega$. The value of a will be :



A 2

B 3

C 5

D 4

Ans. (C)

Sol. $L = mVR + I_{cm}\omega$

$$= mR^2\omega + \frac{2}{3} mR^2\omega$$

$$L = \frac{5}{3} mR^2\omega$$

Resonance Eduventures Ltd.

Reg. Office & Corp. Office : CG Tower, A-46 & 52, IPIA, Near City Mall, Jhalawar Road, Kota (Raj.) - 324005

Ph. No.: +91-744-2777777, 2777700 | FAX No. : +91-022-39167222

To Know more : sms RESO at 56677 | Website : www.resonance.ac.in | E-mail : contact@resonance.ac.in | CIN : U80302RJ2007PLC024029

Toll Free : 1800 258 5555 | 7340010333 | [facebook.com/ResonanceEdu](https://www.facebook.com/ResonanceEdu) | twitter.com/ResonanceEdu | www.youtube.com/resowatch | blog.resonance.ac.in

5. A cylinder of fixed capacity of 44.8 litres contains helium gas at standard temperature and pressure. The amount of heat needed to raise the temperature of gas in the cylinder by 20.0°C will be :

(Given gas constant $R = 8.3 \text{ JK}^{-1}\text{-mol}^{-1}$)

- A 249 J
- B 415 J
- C 498 J
- D 830 J

Ans. (C)

Sol. At STP, $n = \frac{44.8}{22.4} = 2$ moles

$$Q = nC_v\Delta T = (2) \left(\frac{3}{2}R \right) (20) = 3 \times 8.3 \times 20 = 498 \text{ J}$$

6. A wire of length L is hanging from a fixed support. The length changes to L_1 and L_2 when masses 1 kg and 2 kg are suspended respectively from its free end. Then the value of L is equal to :

- A $\sqrt{L_1L_2}$
- B $\frac{L_1 + L_2}{2}$

- C $2L_1 - L_2$
- D $3L_1 - 2L_2$

Ans. (C)

Sol. $1 = k(L_1 - L)$

$2 = k(L_2 - L)$

$$2 = \frac{L_2 - L}{L_1 - L}$$

$$2L_1 - 2L = L_2 - L$$






$$L = 2L_1 - L_2$$

Resonance Eduventures Ltd.

Reg. Office & Corp. Office : CG Tower, A-46 & 52, IPIA, Near City Mall, Jhalawar Road, Kota (Raj.) - 324005

Ph. No.: +91-744-2777777, 2777700 | FAX No. : +91-022-39167222

To Know more : sms RESO at 56677 | Website : www.resonance.ac.in | E-mail : contact@resonance.ac.in | CIN : U80302RJ2007PLC024029

Toll Free : 1800 258 5555  7340010333  facebook.com/ResonanceEdu  twitter.com/ResonanceEdu  www.youtube.com/resowatch  blog.resonance.ac.in

7. Given below are two statements : one is labelled as **Assertion A** and the other is labelled as **Reason R**.

Assertion A : The photoelectric effect does not take place, if the energy of the incident radiation is less than the work function of a metal.

Reason R : Kinetic energy of the photoelectrons is zero, if the energy of the incident radiation is equal to the work function of a metal.

In the light of the above statements, choose the **most appropriate** answer from the options given below.

- A Both **A** and **R** are correct and **R** is the correct explanation of **A**
- B Both **A** and **R** are correct but **R** is **not** the correct explanation of **A**
- C **A** is correct but **R** is not correct
- D **A** is not correct but **R** is correct

Ans. (B)

Sol. If $h\nu < \psi$, then the electron will not be able to cross the barrier of work function

8. A particle of mass 500 gm is moving in a straight line with velocity $v = bx^{5/2}$. The work done by the net force during its displacement from $x=0$ to $x=4$ m is : (Take $b=0.25 \text{ m}^{-3/2} \text{ s}^{-1}$).

- A 2 J
- B 4 J
- C 8 J
- D 16 J

Ans. (D)

Sol. $w = \frac{1}{2}mv_f^2 - \frac{1}{2}mv_i^2$
 $= \frac{1}{2} \times 0.5 \times [0.25 \times 4^5 - 0.25 \times 0^5] = 16 \text{ Joule}$

9. A charge particle moves along circular path in a uniform magnetic field in a cyclotron. The kinetic energy of the charge particle increases to 4 times its initial value. What will be the ratio of new radius to the original radius of circular path of the charge particle :

- A 1 : 1
- B 1 : 2
- C 2 : 1
- D 1 : 4

Ans. (C)

Sol. $R = \frac{mv}{qB} = \frac{\sqrt{2m(KE)}}{qB} \Rightarrow R \propto \sqrt{KE}$; $\frac{R_2}{R_1} = \sqrt{\frac{KE_2}{KE_1}} = \frac{2}{1}$

Resonance Eduventures Ltd.

Reg. Office & Corp. Office : CG Tower, A-46 & 52, IPIA, Near City Mall, Jhalawar Road, Kota (Raj.) - 324005

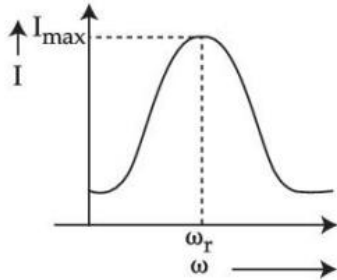
Ph. No.: +91-744-2777777, 2777700 | FAX No. : +91-022-39167222

To Know more : sms RESO at 56677 | Website : www.resonance.ac.in | E-mail : contact@resonance.ac.in | CIN : U80302RJ2007PLC024029

Toll Free : 1800 258 5555 | 7340010333 | [facebook.com/ResonanceEdu](https://www.facebook.com/ResonanceEdu) | twitter.com/ResonanceEdu | www.youtube.com/resowatch | blog.resonance.ac.in

10. For a series LCR circuit, I vs ω curve is shown :

- (a) To the left of ω_r , the circuit is mainly capacitive.
- (b) To the left of ω_r , the circuit is mainly inductive.
- (c) At ω_r , impedance of the circuit is equal to the resistance of the circuit.
- (d) At ω_r , impedance of the circuit is 0.



Question: Choose the most appropriate answer from the options given below :

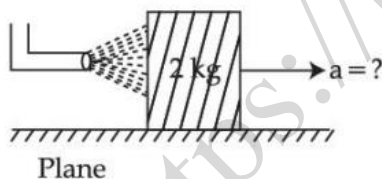
- A (a) and (d) only
- B (b) and (d) only
- C (a) and (c) only
- D (b) and (c) only

Ans. (C)

Sol. If $\omega < \omega_r$, $\frac{1}{C\omega} > L\omega$, so the circuit will be capacitive

At $\omega = \omega_r$, $|Z| = R$, Answer is (C)

11. A block of metal weighing 2 kg is resting on a frictionless plane (as shown in figure). It is struck by a jet releasing water at a rate of 1 kgs^{-1} and at a speed of 10 ms^{-1} . Then, the initial acceleration of the block, in ms^{-2} , will be :



- A 3
- B 6
- C 5
- D 4

Ans. (C)

Sol. $F = dp/dt = vdm/dt = 10 \times 1$

Acc. = $F/M = 10/2 = 5 \text{ m/s}^2$

Resonance Eduventures Ltd.

Reg. Office & Corp. Office : CG Tower, A-46 & 52, IPIA, Near City Mall, Jhalawar Road, Kota (Raj.) - 324005

Ph. No.: +91-744-2777777, 2777700 | FAX No. : +91-022-39167222

To Know more : sms RESO at 56677 | Website : www.resonance.ac.in | E-mail : contact@resonance.ac.in | CIN : U80302RJ2007PLC024029

Toll Free : 1800 258 5555 | 7340010333 | [facebook.com/ResonanceEdu](https://www.facebook.com/ResonanceEdu) | twitter.com/ResonanceEdu | www.youtube.com/resowatch | blog.resonance.ac.in

12. In van der Waals equation $\left[P + \frac{a}{V^2}\right][V - b] = RT$; P is pressure, V is volume, R is universal gas

constant and T is temperature. The ratio of constants $\frac{a}{b}$ is dimensionally equal to :

Question:

A $\frac{P}{V}$

B $\frac{V}{P}$

C PV

D PV^3

Ans. (C)

Sol. $[p] = \frac{[a]}{V^2}$ and $[b] = [V]$

$$\frac{[a]}{[b]} = \frac{PV^2}{V} = PV$$

13. Two vectors \vec{A} and \vec{B} have equal magnitudes. If magnitude of $\vec{A} + \vec{B}$ is equal to two times the magnitude of $\vec{A} - \vec{B}$, then the angle between \vec{A} and \vec{B} will be :

A $\sin^{-1}\left(\frac{3}{5}\right)$

B $\sin^{-1}\left(\frac{1}{3}\right)$

C $\cos^{-1}\left(\frac{3}{5}\right)$

D $\cos^{-1}\left(\frac{1}{3}\right)$

Ans. (C)

Sol. Sol. $|\vec{A} + \vec{B}| = 2|\vec{A} - \vec{B}|$

$$\sqrt{A^2 + B^2 + 2AB \cos \theta} = 2\sqrt{A^2 + B^2 - 2AB \cos \theta}$$

$$A^2 + B^2 + 2AB \cos \theta = 4(A^2 + B^2 - 2AB \cos \theta)$$

$$10AB \cos \theta = 3A^2 + 3B^2$$

$$\cos \theta = \frac{3(A^2 + B^2)}{10AB} = \frac{3 + 2A^2}{10 \times A^2} = \frac{6}{10} = \frac{3}{5}$$

$$\theta = \cos^{-1}\left(\frac{3}{5}\right)$$

Resonance Eduventures Ltd.

Reg. Office & Corp. Office : CG Tower, A-46 & 52, IPIA, Near City Mall, Jhalawar Road, Kota (Raj.) - 324005

Ph. No.: +91-744-2777777, 2777700 | FAX No. : +91-022-39167222

To Know more : sms RESO at 56677 | Website : www.resonance.ac.in | E-mail : contact@resonance.ac.in | CIN : U80302RJ2007PLC024029

Toll Free : 1800 258 5555  7340010333  facebook.com/ResonanceEdu  twitter.com/ResonanceEdu  www.youtube.com/resowatch  blog.resonance.ac.in

14. The escape velocity of a body on a planet 'A' is 12 kms^{-1} . The escape velocity of the body on another planet 'B', whose density is four times and radius is half of the planet 'A', is :

- A 12 kms^{-1}
- B 24 kms^{-1}
- C 36 kms^{-1}
- D 6 kms^{-1}

Ans. (A)

Sol.
$$V_e = \sqrt{\frac{2GM}{R}} = \sqrt{\frac{2G(\rho)\left(\frac{4}{3}\pi R^3\right)}{R}}$$

$$V_e \propto R \sqrt{\rho} \propto \frac{1}{2} \sqrt{4} = \text{same}$$

15. At a certain place the angle of dip is 30° and the horizontal component of earth's magnetic field is 0.5 G. The earth's total magnetic field (in G), at that certain place, is :

- A $\frac{1}{\sqrt{3}}$
- B $\frac{1}{2}$
- C $\sqrt{3}$
- D 1

Ans. (A)

Sol. $B_E \cos \delta = B_H$

$$B_E \cos 30^\circ = 0.5 \text{ G} \Rightarrow B_E = \frac{1}{\sqrt{3}} \text{ G}$$

16. A longitudinal wave is represented by $x = 10 \sin 2\pi\left(nt - \frac{x}{\lambda}\right)$ cm. The maximum particle

velocity will be four times the wave velocity if the determined value of wavelength is equal to :

- A 2π
- B 5π
- C π
- D $\frac{5\pi}{2}$

Ans. (B)

Sol. $V_{\text{Pmax}} = 4 V_{\text{wave}}$

$$10 \times \omega = 4 \times 6\lambda$$

$$10 \times 2\pi f = 4 \times f\lambda ; \lambda = 5\pi$$

Resonance Eduventures Ltd.

Reg. Office & Corp. Office : CG Tower, A-46 & 52, IPIA, Near City Mall, Jhalawar Road, Kota (Raj.) - 324005

Ph. No.: +91-744-2777777, 2777700 | FAX No. : +91-022-39167222

To Know more : sms RESO at 56677 | Website : www.resonance.ac.in | E-mail : contact@resonance.ac.in | CIN : U80302RJ2007PLC024029

Toll Free : 1800 258 5555 | 7340010333 | [facebook.com/ResonanceEdu](https://www.facebook.com/ResonanceEdu) | twitter.com/ResonanceEdu | www.youtube.com/resowatch | blog.resonance.ac.in

17. A parallel plate capacitor filled with a medium of dielectric constant 10, is connected across a battery and is charged. The dielectric slab is replaced by another slab of dielectric constant 15. Then the energy of capacitor will :

- A increase by 50%
- B decrease by 15%
- C increase by 25%
- D increase by 33%

Ans. (A)

Sol. $U_i = \frac{1}{2}(K_1C)V^2$

$U_f = \frac{1}{2}(K_2C)V^2$

$\Delta U = U_f - U_i = \frac{1}{2}(K_2 - K_1)CV^2$

$\frac{\Delta U}{U_i} = \frac{\frac{1}{2} \times 5 \times CV^2}{\frac{1}{2} \times 10 \times CV^2} = \frac{1}{2}$; $\frac{\Delta U}{U_i} \times 100 = 50\%$

18. A positive charge particle of 100 mg is thrown in opposite direction to a uniform electric field of strength $1 \times 10^5 \text{ NC}^{-1}$. If the charge on the particle is $40 \mu\text{C}$ and the initial velocity is 200 ms^{-1} , how much distance it will travel before coming to the rest momentarily :

- A 1 m
- B 5 m
- C 10 m
- D 0.5 m

Ans. (D)

Sol. $a = \frac{qE}{m} = \frac{40 \times 10^{-6} \times 10^5}{100 \times 10^{-6}} = 4 \times 10^4$

$v^2 = u^2 + 2as \Rightarrow 0^2 = (200)^2 + 2(-4 \times 10^4)(s)$






$(s) = 0.5 \text{ m}$

Resonance Eduventures Ltd.

Reg. Office & Corp. Office : CG Tower, A-46 & 52, IPIA, Near City Mall, Jhalawar Road, Kota (Raj.) - 324005

Ph. No.: +91-744-2777777, 2777700 | FAX No. : +91-022-39167222

To Know more : sms RESO at 56677 | Website : www.resonance.ac.in | E-mail : contact@resonance.ac.in | CIN : U80302RJ2007PLC024029

Toll Free : 1800 258 5555  7340010333  facebook.com/ResonanceEdu  twitter.com/ResonanceEdu  www.youtube.com/resowatch  blog.resonance.ac.in

19. Using Young's double slit experiment, a monochromatic light of wavelength 5000 \AA produces fringes of fringe width 0.5 mm . If another monochromatic light of wavelength 6000 \AA is used and the separation between the slits is doubled, then the new fringe width will be :

Question:

- A 0.5 mm
 B 1.0 mm
 C 0.6 mm
 D 0.3 mm

Ans. (D)

Sol. $\beta = \frac{\lambda D}{d}$ $\beta' = \frac{\lambda D}{2d}$

$$\frac{\beta'}{\beta} = \frac{\lambda'}{\lambda \times 2} = \frac{6}{5 \times 2}$$

$$\beta' = 0.5 \times \frac{6}{10} = 0.3 \text{ mm}$$

20. Only 2% of the optical source frequency is the available channel bandwidth for an optical communicating system operating at 1000 nm . If an audio signal requires a bandwidth of 8 kHz , how many channels can be accommodated for transmission :

- A 375×10^7
 B 75×10^7
 C 375×10^8
 D 75×10^9

Ans. (B)

Sol. $F = \frac{c}{\lambda} = \frac{3 \times 10^8}{1000 \times 10^{-9}} = 3 \times 10^{14} \text{ Hz}$

Band width used for transmission = $\frac{2}{100} \times 3 \times 10^{14} \text{ Hz} = 6 \times 10^{12} \text{ Hz}$

Number of channels = $\frac{6 \times 10^{12}}{8 \times 10^3} = \frac{600}{8} \times 10^7 = 75 \times 10^7$

21. Two coils require 20 minutes and 60 minutes respectively to produce same amount of heat energy when connected separately to the same source. If they are connected in parallel arrangement to the same source; the time required to produce same amount of heat by the combination of coils, will be _____ min.

Ans. 15



Sol. $t = \frac{t_1 t_2}{t_1 + t_2} = \frac{20 \times 60}{80} = \frac{120}{8} = 15 \text{ min}$

Resonance Eduventures Ltd.

Reg. Office & Corp. Office : CG Tower, A-46 & 52, IPIA, Near City Mall, Jhalawar Road, Kota (Raj.) - 324005

Ph. No.: +91-744-2777777, 2777700 | FAX No. : +91-022-39167222

To Know more : sms RESO at 56677 | Website : www.resonance.ac.in | E-mail : contact@resonance.ac.in | CIN : U80302RJ2007PLC024029

Toll Free : 1800 258 5555  7340010333  facebook.com/ResonanceEdu  twitter.com/ResonanceEdu  www.youtube.com/resowatch  blog.resonance.ac.in

22. The intensity of the light from a bulb incident on a surface is 0.22 W/m^2 . The amplitude of the magnetic field in this light-wave is _____ $\times 10^{-9} \text{ T}$.

(Given : Permittivity of vacuum $\epsilon_0 = 8.85 \times 10^{-12} \text{ C}^2 \text{ N}^{-1} \text{ m}^{-2}$, speed of light in vacuum $c = 3 \times 10^8 \text{ ms}^{-1}$)

Ans. 43

Sol. $I = \frac{dE}{Adt}$

$u_d = \frac{dE}{Adx}$

Dividing $\frac{I}{u_d} = \frac{dx}{dt} = c$

$\Rightarrow u_d = \frac{I}{c} = \frac{0.22}{3 \times 10^8} = 7.2 \times 10^{-10} \text{ J/m}^3$

Magnetic energy density = 3.6×10^{-10}

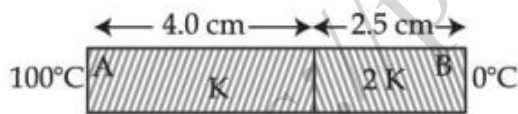
$\frac{B_{\text{rms}}^2}{2\mu_0} = 3.6 \times 10^{-10}$ where $B_{\text{rms}}^2 = \left(\frac{B_0}{\sqrt{2}}\right)^2 = \frac{B_0^2}{2}$

$\frac{B_0^2}{4\mu_0} = 3.6 \times 10^{-10} \Rightarrow B_0 = \sqrt{4 \times (4\pi \times 10^{-7}) \times 3.6 \times 10^{-10}}$

$B_0 = 4 \times 6 \times \sqrt{\pi} \times 10^{-9} \text{ Tesla}$

$B_0 = 42.54 = 43$

23. As per the given figure, two plates A and B of thermal conductivity K and 2K are joined together to form a compound plate. The thickness of plates are 4.0 cm and 2.5 cm respectively and the area of cross-section is 120 cm^2 for each plate. The equivalent thermal conductivity of the compound plate is $\left(1 + \frac{5}{\alpha}\right) K$, then the value of α will be _____.



Ans. 21

Sol. $R_{\text{eq}} = R_1 + R_2$

$\frac{6.5 \text{ cm}}{K_{\text{eq}} A} = \frac{4 \text{ cm}}{KA} + \frac{2.5 \text{ cm}}{(2K)A}$

$K_{\text{eq}} = \frac{65}{52.5} = \frac{26}{21} = \frac{5}{\alpha}$

$= \frac{5}{21} = \frac{5}{\alpha} \Rightarrow \alpha = 21$

Resonance Eduventures Ltd.

Reg. Office & Corp. Office : CG Tower, A-46 & 52, IPIA, Near City Mall, Jhalawar Road, Kota (Raj.) - 324005

Ph. No.: +91-744-2777777, 2777700 | FAX No. : +91-022-39167222

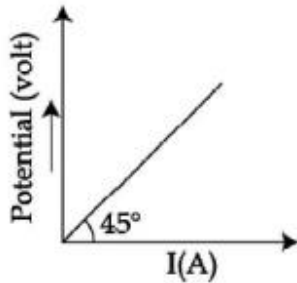
To Know more : sms RESO at 56677 | Website : www.resonance.ac.in | E-mail : contact@resonance.ac.in | CIN : U80302RJ2007PLC024029

Toll Free : 1800 258 5555 | 7340010333 | [facebook.com/ResonanceEdu](https://www.facebook.com/ResonanceEdu) | twitter.com/ResonanceEdu | www.youtube.com/resowatch | blog.resonance.ac.in

24. A body is performing simple harmonic with an amplitude of 10 cm. The velocity of the body was tripled by air Jet when it is at 5 cm from its mean position. The new amplitude of vibration is \sqrt{x} cm. The value of x is _____.

Ans. 700

25. The variation of applied potential and current flowing through a given wire is shown in figure. The length of wire is 31.4 cm. The diameter of wire is measured as 2.4 cm. The resistivity of the given wire is measured as $x \times 10^{-3} \Omega \text{ cm}$. The value of x is _____.
[Take $\pi = 3.14$]



Ans. 144

Sol. $R = \frac{V}{i} = \tan 45^\circ = 1 \Omega$

$$R = \frac{\rho l}{A} \Rightarrow \rho = \frac{RA}{l} = \frac{1 \times \pi (1.2)^2}{31.4} = 144 \times 10^{-3} \Omega \cdot \text{cm}$$

Ans. is 144

26. 300 cal. of heat is given to a heat engine and it rejects 225 cal. of heat. If source temperature is 227°C , then the temperature of sink will be _____ $^\circ\text{C}$.

Ans. 102

Sol. $\frac{Q_1}{Q_2} = \frac{T_1}{T_2}$

$$\frac{300}{225} = \frac{500}{T_2}$$

$$T_2 = 375 \text{ k} = 102^\circ\text{C}$$

27. $\sqrt{d_1}$ and $\sqrt{d_2}$ are the impact parameters corresponding to scattering angles 60° and 90° respectively, when an α particle is approaching a gold nucleus. For $d_1 = x d_2$, the value of x will be _____.

Ans. 3

Resonance Eduventures Ltd.

Reg. Office & Corp. Office : CG Tower, A-46 & 52, IPIA, Near City Mall, Jhalawar Road, Kota (Raj.) - 324005

Ph. No.: +91-744-2777777, 2777700 | FAX No. : +91-022-39167222

To Know more : sms RESO at 56677 | Website : www.resonance.ac.in | E-mail : contact@resonance.ac.in | CIN : U80302RJ2007PLC024029

Toll Free : 1800 258 5555 | 7340010333 | [facebook.com/ResonanceEdu](https://www.facebook.com/ResonanceEdu) | twitter.com/ResonanceEdu | www.youtube.com/resowatch | blog.resonance.ac.in

Sol. The relation between impact parameter and scattering angle is $b = \frac{kze^2}{E} \cot\left(\frac{\theta}{2}\right)$

$$\Rightarrow b \propto \cot\left(\frac{\theta}{2}\right)$$

$$\sqrt{d_1} \propto \cot\left(\frac{60}{2}\right)$$

$$\sqrt{d_2} \propto \cot\left(\frac{90}{2}\right)$$

$$\frac{\sqrt{d_1}}{\sqrt{d_2}} = \sqrt{3} \Rightarrow d_1 = 3d_2 \Rightarrow x = 3, \text{ Ans is } 3$$

28. A transistor is used in an amplifier circuit in common emitter mode. If the base current changes by $100 \mu\text{A}$, it brings a change of 10 mA in collector current. If the load resistance is $2 \text{ k}\Omega$ and input resistance is $1 \text{ k}\Omega$, the value of power gain is $x \times 10^4$. The value of x is

Ans. 2

$$\text{Ans. } \beta_{AC} = \frac{\Delta i_c}{\Delta i_b} = \frac{10 \times 10^{-3}}{100 \times 10^{-6}} = 100$$

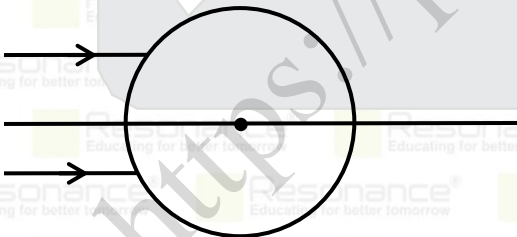
$$A_p = \beta_{AC}^2 \frac{R_{out}}{R_{in}} = (100)^2 \times \frac{2 \times 10^3}{1 \times 10^3} = 2 \times 10^4$$

$$x = 2 \quad \text{Ans. is } 2$$

29. A parallel beam of light is allowed to fall on a transparent spherical globe of diameter 30 cm and refractive index 1.5 . The distance from the centre of the globe at which the beam of light can converge is _____ mm.

Ans. 225

Sol.



$$\frac{1.5}{V_1} - \frac{1}{\infty} = \frac{1.5 - 1}{+15}$$

$$V_1 = 45$$

$$\frac{1}{V_2} - \frac{1.5}{15} = \frac{1 - 1.5}{-15}$$

$$V_2 = 7.5 \text{ cm}$$

$$\text{From centre } 15 + 7.5 = 22.5 \text{ cm}$$

Resonance Eduventures Ltd.

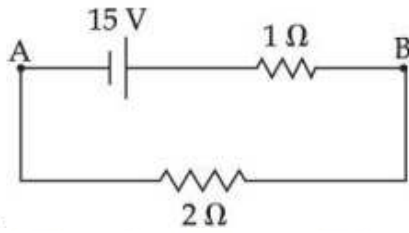
Reg. Office & Corp. Office : CG Tower, A-46 & 52, IPIA, Near City Mall, Jhalawar Road, Kota (Raj.) - 324005

Ph. No.: +91-744-2777777, 2777700 | FAX No. : +91-022-39167222

To Know more : sms RESO at 56677 | Website : www.resonance.ac.in | E-mail : contact@resonance.ac.in | CIN : U80302RJ2007PLC024029

Toll Free : 1800 258 5555 | 7340010333 | [facebook.com/ResonanceEdu](https://www.facebook.com/ResonanceEdu) | twitter.com/ResonanceEdu | www.youtube.com/resowatch | blog.resonance.ac.in

30. For the network shown below, the value of $V_B - V_A$ is _____ V.



Ans. 10



Resonance Eduventures Ltd.

Reg. Office & Corp. Office : CG Tower, A-46 & 52, IPIA, Near City Mall, Jhalawar Road, Kota (Raj.) - 324005

Ph. No.: +91-744-2777777, 2777700 | FAX No. : +91-022-39167222

To Know more : sms RESO at 56677 | Website : www.resonance.ac.in | E-mail : contact@resonance.ac.in | CIN : U80302RJ2007PLC024029

Toll Free : 1800 258 5555  7340010333  facebook.com/ResonanceEdu  twitter.com/ResonanceEdu  www.youtube.com/resowatch  blog.resonance.ac.in

Numbers that Inspire Students to **EXCEL**

Trust of 9,50,000+ STUDENTS*	Total Selections 1,78,546 <small>JEE (Adv.) + Eligibility for JEE (Main) + NEET (UG)</small>	AIRs in TOP-100 350 <small>JEE (Adv.) + JEE (Main) + NEET (UG)</small>	Pool of 800+ FACULTY	Study Centres in 70+ CITIES
---	---	--	-----------------------------------	--

*Since 2001 | **Students Qualified from JEE (Main) to JEE (Advanced) since 2012 | Top 50 (lectures & AIRs in TOP-100 mentioned are in JEE (Adv.) | JEE (Main) since 2002, JEE (Main) / APJEE (since 2009), NEET (UG) / APJEE (since 2012) | APJEE (Kota Park)

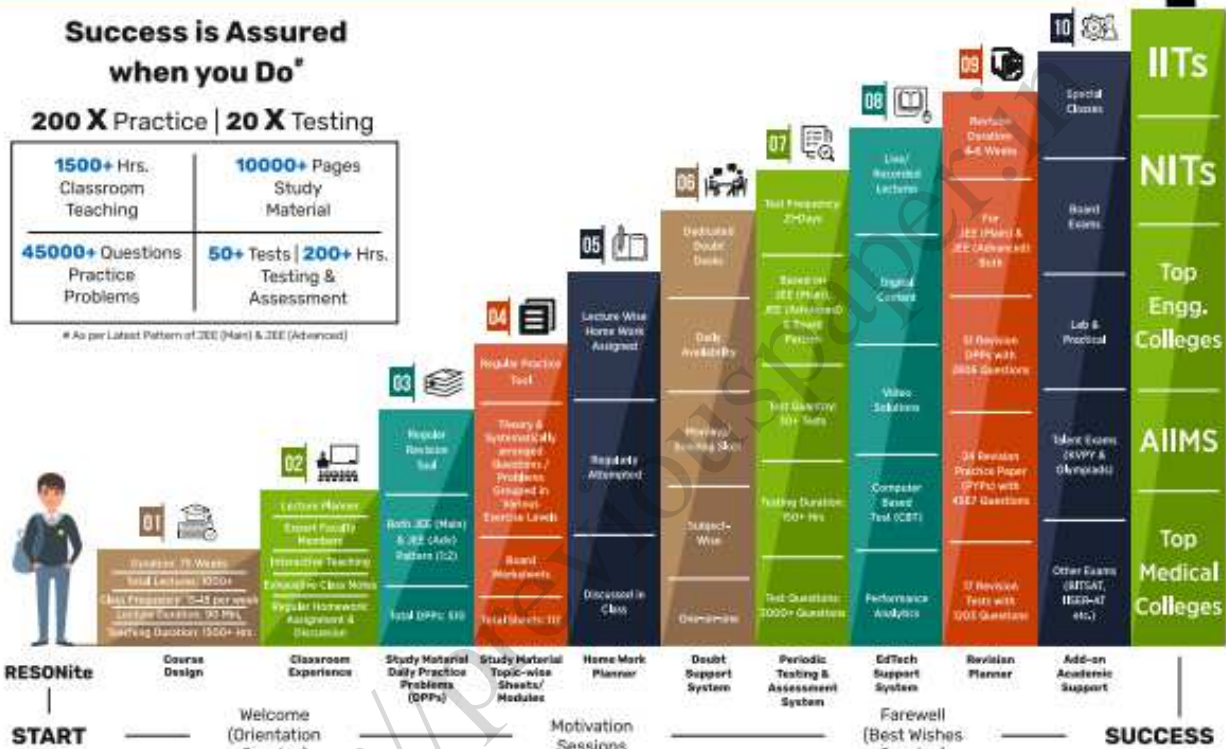
The 10-Building Blocks of **Proven & Trusted Teaching Methodology @ Resonance**

**Success is Assured
when you Do***

200 X Practice | 20 X Testing

1500+ Hrs. Classroom Teaching	10000+ Pages Study Material
45000+ Questions Practice Problems	50+ Tests 200+ Hrs. Testing & Assessment

*As per Latest Pattern of JEE (Main) & JEE (Advanced)



The figures (approx.) shown in the graph are of 2 Years Classroom Program (VIKAAS-XI & VIETA-XII) for JEE (Advanced) @ Resonance in Academic Session 2021-22. The figures vary for JEE (Main), NEET (UG) and Other Courses.

The Strong Faculty Team at Resonance Kota to deliver this successful Teaching Methodology



SCHOLARSHIP UPTO

100%

Based on JEE (Main) 2022 NTA Score (Percentile) & Scholarship Test (ResoNET)

Admission Announcement: 2022-23 Class: 5 to 12 & 12+

ResoNET 3rd & 10th July

Target: JEE (Advanced) | JEE (Main) | NEET (UG) Pre-Foundation (V to X) | Board

Polish your subject knowledge to Shine in JEE (Advanced) 2022 with the guidance of

HODs & Top Notch Sr. Faculty of Resonance

SPARK 7 WEEKS COMPACT COURSE OFFLINE/ONLINE

from 4th July 2022

Scholarship upto 90%

Resonance Eduventures Ltd.

Follow us at

Kota Study Centre & Registered Corporate Office:
CG Tower, A-46 & 52, IPIA, Near City Mall,
Jhalawar Road, Kota (Raj.) - 324005

Tel No.: 0744-2777777, 2777700

Toll Free: 1800 258 5555 | CIN: U80302RJ2007PLC024029

e-mail: contact@resonance.ac.in | visit: www.resonance.ac.in