

$$\frac{\lambda_1}{\lambda_2} = \sqrt{\frac{m_2}{m_1}}$$

$$\frac{\lambda_1}{\lambda_2} = \sqrt{\frac{12}{4}}$$

$$\lambda_1 : \lambda_2 = \sqrt{3} : 1$$

2. A particle experiences a force of 20 N between both the plates of parallel plate capacitor. Find force on the particle when one plate of the capacitor is removed.

(1) 10 N (2) 5N (3) 40 N (4) None of these

Ans. (1)

Sol. Initially force is $F = qE = q\left(\frac{q}{A \epsilon_0}\right) = \frac{q^2}{A \epsilon_0}$

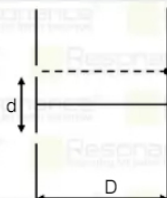
after removing one plate force is

$$F' = qE' = q\left(\frac{q}{2A \epsilon_0}\right) = \left(\frac{q^2}{2A \epsilon_0}\right)$$

$$\Rightarrow F' = \frac{F}{2}$$

$$\Rightarrow F' = \frac{20}{2} = 10\text{N}$$

3. In YDSE separation between both the slits is 0.6 mm and separation between both the slits & the screen is 80 cm. 1st dark fringe is observed on the screen in front of one of the slits find wavelength of light :



(1) 4.5×10^{-4} mm (2) 2.6×10^{-3} mm (3) 1.5×10^{-4} mm (4) 6.5×10^{-3} mm

Ans. (1)

Resonance Eduventures Ltd.

Reg. Office & Corp. Office : CG Tower, A-46 & 52, IPIA, Near City Mall, Jhalawar Road, Kota (Raj.) - 324005

Ph. No.: +91-744-2777777, 2777700 | FAX No. : +91-022-39167222

To Know more : sms RESO at 56677 | Website : www.resonance.ac.in | E-mail : contact@resonance.ac.in | CIN : U80302RJ2007PLC024029

Toll Free : 1800 258 5555 | 7340010333 | facebook.com/Resonanceedu | twitter.com/Resonanceedu | www.youtube.com/reswatch | blog.resonance.ac.in

This solution was download from Resonance JEE (MAIN) 2022 Solution portal

PAGE # 1

Resonance® Educating for better tomorrow | JEE MAIN-2022 | DATE : 27-06-2022 (SHIFT-1) | PAPER-1 | MEMORY BASED | PHYSICS

Sol. According to question

$$\frac{\beta}{2} = 0.3 \text{ mm} \Rightarrow \beta = 0.6 \text{ mm}$$

$$\Rightarrow \frac{\lambda D}{d} = 0.6 \quad \Rightarrow \quad \lambda = \frac{0.6d}{D} \quad \Rightarrow \quad \lambda = \frac{0.6 \times 0.6}{800}$$

$$\Rightarrow \lambda = 4.5 \times 10^{-4} \text{ mm}$$

4. When a photon having energy 10.2 eV is absorbed by Li^{++} ion then find change in angular momentum

(1) $\frac{h}{2\pi}$ (2) $\frac{2h}{2\pi}$ (3) $\frac{3h}{2\pi}$ (4) zero

Ans. (3)

Sol. $\Delta E = 13.6 \times z^2 \left(\frac{1}{n_1^2} - \frac{1}{n_2^2} \right)$

$$10.2 = 13.6 \times 3^2 \left[\frac{1}{n_1^2} - \frac{1}{n_2^2} \right]$$

$$n_1 = 3 \text{ \& } n_2 = 6$$

$$\text{change in angular momentum } \Delta L = \frac{n_2 h}{2\pi} - \frac{n_1 h}{2\pi} = \frac{3h}{2\pi}$$

5. A man standing on ground observes that rain is coming at an angle 45° with vertical. When he runs with

speed $15\sqrt{2}$ km/hr, rain appears to him vertical. Find speed of rain w.r.t. man :

- (1) 30 km/hr (2) $\frac{15}{\sqrt{2}}$ km/hr (3) 15 km / hr (4) $15\sqrt{2}$ km/h

Ans. (4)
Sol.



$$V_{rm} = V_{rg} \cos 45^\circ$$

$$V_{mg} = V_{rg} \sin 45^\circ = 15\sqrt{2}$$

$$V_{rg} = 30 \text{ km/hr}$$

$$\therefore V_{rm} = \frac{30}{\sqrt{2}} \text{ km/hr} = 15\sqrt{2} \text{ km/h}$$

Resonance Eduventures Ltd.

Reg. Office & Corp. Office : CG Tower, A-46 & 52, IPIA, Near City Mall, Jhalawar Road, Kota (Raj.) - 324005

Ph. No. : +91-744-2777777, 2777700 | FAX No. : +91-022-39167222

To Know more : sms RESO at 56677 | Website : www.resonance.ac.in | E-mail : contact@resonance.ac.in | CIN : U80302RJ2007PLC024029

Toll Free : 1800 258 5555 | 7340010333 | facebook.com/ResonanceEdu | twitter.com/ResonanceEdu | www.youtube.com/resonance | blog.resonance.ac.in

This solution was download from Resonance JEE (MAIN) 2022 Solution portal

PAGE # 2

Resonance Educating for better tomorrow | JEE MAIN-2022 | DATE : 27-06-2022 (SHIFT-1) | PAPER-1 | MEMORY BASED | PHYSICS

6. A man running towards stationary source with speed $\frac{C}{5}$. Speed of sound is C then observed % change in frequency of sound heard by observer will be :
(1) 10% (2) 20% (3) 15% (4) 25%

Ans. (1)

Sol.



$$f' = \frac{V + V_o}{V} f$$

$$f' = \frac{C + C/5}{C} f$$

$$f' = \frac{6C}{5C} f$$

$$f' = \frac{6}{5} f$$

$$\frac{f'}{f} = \frac{6}{5}$$

$$\frac{f' - f}{f} = \frac{6 - 5}{5}$$

$$\frac{\Delta f}{f} = \frac{1}{5}$$

$$\frac{\Delta f}{f} \times 100 = \frac{1}{5} \times 100 = 20\%$$

7. A capacitor of capacitance $C = 50$ pF is charged with voltage $V = 100$ volt. Now another identical uncharged capacitor is connected with this charged capacitor. Find energy loss during the process :
(1) 1.5×10^{-7} J (2) 2.5×10^{-7} J (3) 1.25×10^{-7} J (4) 5×10^{-7} J

Ans. (3)

Sol. Energy loss $H = \frac{1}{2} \frac{C_1 C_2}{C_1 + C_2} (V_1 - V_2)^2$

$$\Rightarrow H = \frac{1}{2} \frac{C^2}{2C} (V - 0)^2$$

$$\Rightarrow H = \frac{1}{4} C V^2$$

$$\Rightarrow H = \frac{1}{4} \times 50 \times 10^{-12} \times 100 \times 100$$

$$\Rightarrow H = 1.25 \times 10^{-7} \text{ J}$$

Resonance Eduventures Ltd.

Reg. Office & Corp. Office : CG Tower, A-46 & 52, IPIA, Near City Mall, Jhalawar Road, Kota (Raj.) - 324005

Ph. No.: +91-744-2777777, 2777700 | FAX No.: +91-022-39167222

To Know more : sms RESO at 56677 | Website : www.resonance.ac.in | E-mail : contact@resonance.ac.in | CIN : U80302RJ2007PLC024029

Toll Free : 1800 258 5555 | 7340010333 | facebook.com/ResonanceEdu | twitter.com/ResonanceEdu | www.youtube.com/resowatch | blog.resonance.ac.in

This solution was download from Resonance JEE (MAIN) 2022 Solution portal

PAGE # 3

| JEE MAIN-2022 | DATE : 27-06-2022 (SHIFT-1) | PAPER-1 | MEMORY BASED | PHYSICS

8. Find velocity of leakage liquid :

$$m = 400 \text{ kg} \quad A = 0.5 \text{ m}^2$$

$$(2) \quad A = 0.5 \text{ m}^2$$

40 cm

$$a = 10^{-3} \text{ m}^2 \text{ (small)}$$

(1)

- (1) 24 m/s (2) 20m/s (3) 6 m/s (4) 10 m/s

Ans. (1)

Sol. Apply Bernoulli equation at top and bottom Points (1) and (2)

$$P_0 + \frac{mg}{A} + 0 + \rho gh = P_0 + \frac{1}{2} \rho v^2 + 0$$

$$\frac{4000}{5} + 10^3 \times 10 \times 0.4 = \frac{1}{2} \times 10^3 \times v^2$$

$$8000 + 4000 = \frac{1}{2} \times 1000 \times v^2$$

$$v^2 = 24$$

$$v = \sqrt{24} \text{ m/s}$$

9. Current $I = 5 \sin(120\pi t)$ is flowing AC circuit. Find time in which current reaches to zero to maximum value.

- (1) $\frac{1}{120}$ sec (2) $\frac{1}{60}$ sec (3) $\frac{1}{240}$ sec (4) $\frac{\pi}{60}$ sec

Ans. (3)

$$\text{Sol. } T = \frac{2\pi}{\omega} = \frac{2\pi}{120\pi} = \frac{1}{60}$$

$$\frac{T}{4} = \frac{1}{240} \text{ sec}$$

10. A particle performing SHM with amplitude A if time taken by particle from mean position to A/2 is 3 sec. then time period of SHM will be :

- (1) 6 sec (2) 12 sec (3) 18 sec (4) 36 sec

Ans. (4)

$$\text{Sol. } X = A \sin \omega t$$

$$\frac{A}{2} = A \sin \omega t$$

$$\omega t = \frac{\pi}{6}$$

$$t = \frac{T}{12} = 3 \text{ sec.}$$

$$T = 36 \text{ sec.}$$

Resonance Eduventures Ltd.

Reg. Office & Corp. Office : CG Tower, A-46 & 52, IPIA, Near City Mall, Jhalawar Road, Kota (Raj.) - 324005

Ph. No.: +91-744-2777777, 2777700 | FAX No.: +91-022-39167222

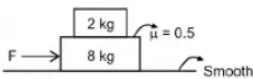
To Know more : sms RESO at 56677 | Website : www.resonance.ac.in | E-mail : contact@resonance.ac.in | CIN : U80302RJ2007PLC024029

Toll Free : 1800 258 5555 | 7340010333 | facebook.com/ResonanceEdu | twitter.com/ResonanceEdu | www.youtube.com/resowatch | blog.resonance.ac.in

This solution was download from Resonance JEE (MAIN) 2022 Solution portal

PAGE # 4

11. Find maximum value of force so that block will not Slide on each other.

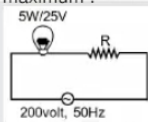


- (1) 50 N (2) 100 N (3) 150 N (4) 200 N

Ans. (1)

Sol. maximum acceleration of upper block = $\mu g = 0.5 \times 10 = 5$
 $F_{\max} = (2 + 8) \times 5 = 50\text{N}$

12. Find R for which brightness in lamp is maximum :



- (1) 575 Ω (2) 675 Ω (3) 775 Ω (4) 875 Ω

Ans. (4)

Sol. $i_{\text{rms}} = \frac{5}{25} = \frac{200}{R_B + R}$
 $R_B + R = 1000$
 $R = 100 - R_B$
 $= 1000 - \frac{25 \times 25}{5} = 1000 - 125 = 875$

13. O_2 and H_2 is filled in a container of volume 2000 cm^3 at pressure 100 kPa and temperature 300 K . If mass of gas mixture 0.76 g . Find ratio of moles of O_2 and H_2 :

- (1) 1/2 (2) 1/3 (3) 1/4 (4) 1/8

Ans. (2)

Sol. $V = 2000 \text{ cm}^3$
 $P = 100 \text{ kPa}$
 $T = 300 \text{ K}$
 Mass of gas mixture = $0.76 \text{ g } (\text{O}_2 + \text{H}_2)$

Find = $\frac{n_1}{n_2} = ?$

$$n = \frac{PV}{RT} = \frac{2 \times 10^{-3} \times 100 \times 10^3 \times 3}{25 \times 300}$$

$$n = \frac{2}{25}$$

$$n_2 = \frac{0.08(30 - 32 + 0.76)}{30}$$

$$\frac{n_1}{n_2} = \frac{0.08(32 - 0.76)}{0.08(30 - 32 + 0.76)} = \frac{32 - 0.76}{(-2 + 0.76)}$$

$$n_1(32) + n_2(2) = 0.76$$

$$n_2 + 16n_1 = 0.38$$

$$n_2 + n_1 = 0.08$$

$$15n_1 = 0.30$$

$$n_1 = \frac{0.30}{15} = 0.02$$

$$n_2 = 0.06$$

Resonance Eduventures Ltd.

Reg. Office & Corp. Office : CG Tower, A-46 & 52, IPIA, Near City Mall, Jhalawar Road, Kota (Raj.) - 324005

Ph. No.: +91-744-2777777, 2777700 | FAX No. : +91-022-39167222

To Know more : sms RESO at 56677 | Website : www.resonance.ac.in | E-mail : contact@resonance.ac.in | CIN : U80302RJ2007PLC024029

Toll Free : 1800 258 5555 7340010333 Facebook.com/ResonanceEdu Twitter.com/ResonanceEdu www.youtube.com/resowatch blog.resonance.ac.in

This solution was download from Resonance JEE (MAIN) 2022 Solution portal

PAGE # 5

14. A ball of density d_1 and mass M is dropped in glycerine of density d_2 . Find viscous force on the ball at terminal velocity of the ball.

- (1) $Mg \left(1 - \frac{d_2}{d_1}\right)$ (2) $Mg \left(1 - \frac{d_1}{d_2}\right)$ (3) $Mg \left(1 - \frac{d_1^2}{d_1 d_2}\right)$ (4) None of these

Ans. (1)

Sol. At the time of terminal velocity ball is in equilibrium
 i.e. $F_g = F_b + F_v$

$$\Rightarrow F_v = F_g - F_b$$

$$\Rightarrow F_v = Mg - d_2 \frac{M}{d_1} g$$

$$\Rightarrow Mg \left(1 - \frac{d_2}{d_1} \right)$$

15. In a Carnot's engine temperature heat reservoir is 527°C and temperature of heat sink is 200 K. If heat released by the engine is 12000 kJ, then find heat absorbed by the engine.

- (1) 48000 kJ (2) 36000 kJ (3) 60000 kJ (4) 72000 kJ

Ans. (1)

$$\text{Sol. } \frac{Q_2}{Q_1} = \frac{T_2}{T_1} \Rightarrow \frac{12000 \times 10^3}{Q_1} = \frac{200}{800}$$

$$\Rightarrow Q_1 = \frac{12000 \times 10^3 \times 800}{200}$$

$$\Rightarrow Q_1 = 48000 \times 10^3 \text{ J}$$

$$\Rightarrow Q_1 = 48000 \text{ kJ}$$

16. A projectile is fired with speed 20 m/s at an angle α from horizontal. If angle made by its velocity vector after 10 sec is β , then value of $\tan \beta$ will be :

- (1) $\frac{20 \sin \alpha + 100}{20 \cos \alpha}$ (2) $\frac{20 \sin \alpha - 100}{20 \cos \alpha}$ (3) $\frac{20 \cos \alpha - 100}{20 \sin \alpha}$ (4) $20 \tan \alpha - 100$

Ans. (2)

$$\text{Sol. } \tan \beta = v_y/v_x = \frac{20 \sin \alpha - 100}{20 \cos \alpha}$$

Resonance Eduventures Ltd.

Reg. Office & Corp. Office : CG Tower, A-46 & 52, IPIA, Near City Mall, Jhalawar Road, Kota (Raj.) - 324005

Ph. No.: +91-744-2777777, 2777700 | FAX No.: +91-022-39167222

To Know more : sms RESO at 56677 | Website : www.resonance.ac.in | E-mail : contact@resonance.ac.in | CIN : U80302RJ2007PLC024029

Toll Free : 1800 258 5555 | 7340010333 | Facebook.com/ResonanceEdu | Twitter.com/ResonanceEdu | www.youtube.com/resowatch | blog.resonance.ac.in

This solution was download from Resonance JEE (MAIN) 2022 Solution portal

PAGE # 6

Resonance® | JEE MAIN-2022 | DATE : 27-06-2022 (SHIFT-1) | PAPER-1 | MEMORY BASED | PHYSICS

17. If two antennas of height $h_1 = 25$ m and $h_2 = 49$ m are used for transmission and receiver respectively, then distance between them in LOS communication system will be:

- (1) $175\sqrt{5} \times 10^2$ (2) $185\sqrt{5} \times 10^2$ (3) $192\sqrt{5} \times 10^2$ (4) $199\sqrt{5} \times 10^2$

Ans. (3)

$$\text{Sol. } d = \sqrt{2Rh_1} + \sqrt{2Rh_2}$$

$$= \sqrt{2R} (5 + 7)$$

$$= \sqrt{6400 \times 2 \times 10^3} (12)$$

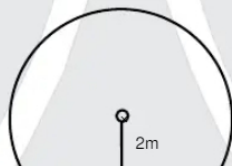
$$= 12\sqrt{64 \times 10^4 \times 20}$$

$$= 12 \times 800 \times 2\sqrt{5} = 24 \times 800\sqrt{5} = 19200\sqrt{5}$$

$$= 192\sqrt{5} \times 10^2$$

$$K = 192$$

18. Mass of bob in a pendulum is 50 gram. A bullet of 75 gram strikes with speed v and emerges with speed $v/3$ as shown in figure. If pendulum bob just complete the vertical circle then speed of bullet will be:



(1) 10 m/s (2) 20 m/s (3) 5 m/s (4) 25 m/s

Ans. (1)

Sol. Pendulum length 2m

$$75 V = 50\sqrt{5Rg} + 75(V/3)$$

$$75\left(\frac{2V}{3}\right) = 50\sqrt{5 \times 2 \times 10}$$

$$75\left(\frac{2V}{3}\right) = 50 \times 10$$

$$V = \frac{500 \times 3}{150} = \frac{500}{50} = 10 \text{ m/s}$$

Resonance Eduventures Ltd.

Reg. Office & Corp. Office : CG Tower, A-46 & 52, IPIA, Near City Mall, Jhalawar Road, Kota (Raj.) - 324005

Ph. No.: +91-744-2777777, 2777700 | FAX No. : +91-022-39167222

To Know more : sms RESO at 56677 | Website : www.resonance.ac.in | E-mail : contact@resonance.ac.in | CIN : U80302RJ2007PLC024029

Toll Free : 1800 258 5555 7340010333 facebook.com/ResonanceEdu www.youtube.com/reswatch blog.resonance.ac.in

This solution was download from Resonance JEE (MAIN) 2022 Solution portal PAGE # 7

Resonance | JEE MAIN-2022 | DATE : 27-06-2022 (SHIFT-1) | PAPER-1 | MEMORY BASED | PHYSICS

19. Two blocks of 10 kg and 30 kg are placed at (0, 0) and (x, 0) respectively. If 10 kg block is shifted by 6 cm towards 30 kg block than by how much distance 30 kg is to be shifted so that COM will not shift.



- (1) 2 cm left (2) 4 cm left (3) 4 cm right (4) 0.5 cm left

Ans. (1)

Sol. $\frac{m_1 \Delta x + m_2 \Delta x_2}{m_1 + m_2} = \Delta x_{cm}$

$$10(6) + 30(\Delta x_2) = 0$$

$$\Delta x_2 + 30(\Delta x_2) = 2 \text{ cm}$$

20. Match the Following option

- (A) Infrared waves
(B) UV Rays
(C) x-Rays
(D) Microwaves

1. Radar
 2. Sterilizing
 3. Crystal structure
 4. Green house effect
- (2) A - 3, B - 4, C - 3, D - 1
(4) A - 1, B - 2, C - 3, D - 4

- (1) A - 4, B - 2, C - 3, D - 1
(3) A - 2, B - 2, C - 3, D - 4

Ans. (1)

21. Light ray is incident at angle double of angle of refraction from air to medium of refractive index $\sqrt{2}n$ then find angle of incidence

- (1) $\sin^{-1} \frac{\sqrt{n}}{2}$ (2) $2 \sin^{-1} \frac{\sqrt{n}}{2}$ (3) $\cos^{-1} \frac{\sqrt{n}}{2}$ (4) $2 \cos^{-1} \frac{\sqrt{n}}{2}$

Ans. (4)

Sol. $1 \sin 2r = \sqrt{2}n \sin r$

$$2 \sin r \cos r = \sqrt{2}n \sin r$$

$$\cos r = \frac{\sqrt{n}}{2}$$

$$r = \cos^{-1} \sqrt{\frac{11}{2}}$$

$$i = 2r = 2 \cos^{-1} \sqrt{\frac{11}{2}}$$

Resonance Eduventures Ltd.

Reg. Office & Corp. Office : CG Tower, A-46 & 52, IPIA, Near City Mall, Jhalawar Road, Kota (Raj.) - 324005

Ph. No.: +91-744-2777777, 2777700 | FAX No. : +91-022-39167222

To Know more : sms RESO at 56677 | Website : www.resonance.ac.in | E-mail : contact@resonance.ac.in | CIN : U80302RJ2007PLC024029

Toll Free : 1800 258 5555 | 7340010333 | [facebook.com/ResonanceEdu](https://www.facebook.com/ResonanceEdu) | twitter.com/ResonanceEdu | www.youtube.com/reswatch | blog.resonance.ac.in

This solution was download from Resonance JEE (MAIN) 2022 Solution portal

PAGE # 8



| JEE MAIN-2022 | DATE : 27-06-2022 (SHIFT-1) | PAPER-1 | MEMORY BASED | PHYSICS

22. A cell is shorted with a resistance of 8Ω . Balanced length for potential difference across the cell is 3cm . If the cell is shorted with 4Ω resistance balance length becomes 2cm . find internal resistance of the cell.
 (1) 8Ω (2) 4Ω (3) 2Ω (4) 1Ω

Ans. (1)

Sol. $iR = x\ell$

$$\Rightarrow \frac{\epsilon}{R_1 + r} R_1 = x\ell_1$$

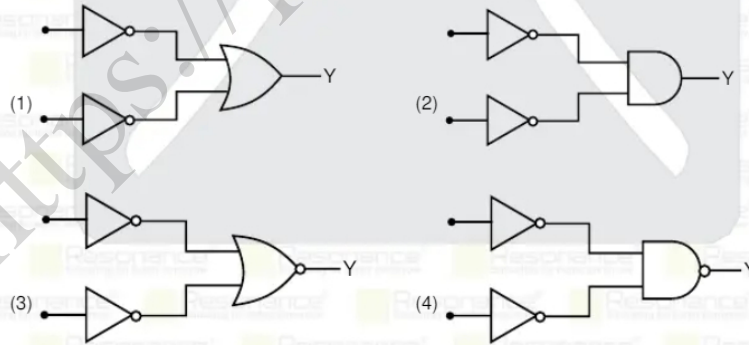
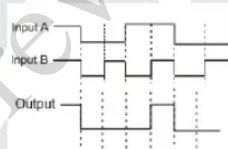
$$\Rightarrow \frac{\epsilon}{1 + \frac{r}{R_1}} = x\ell_1 \quad \& \quad \frac{\epsilon}{1 + \frac{r}{R_2}} = x\ell_2$$

Dividing the Equation,

$$\frac{1 + \frac{r}{R_1}}{1 + \frac{r}{R_2}} = \frac{\ell_2}{\ell_1} = \frac{2}{3} \Rightarrow 3 + \frac{3r}{8} = 2 + \frac{2r}{4} \Rightarrow \frac{r}{2} - \frac{3r}{8} = 1$$

$$\Rightarrow r = 8 \Omega$$

23. The logic circuit shown below has the input waveforms 'A' and 'B' as shown. Pick out the correct out put waveform.



Ans. (3)

Sol. $Y = \overline{A + B} = A.B$

it is AND gate.

Resonance Eduventures Ltd.

Reg. Office & Corp. Office : CG Tower, A-46 & 52, IPIA, Near City Mall, Jhalawar Road, Kota (Raj.) - 324005


Ph. No.: +91-744-2777777, 2777700 | FAX No. : +91-022-39167222

To Know more : sms RESO at 56677 | Website : www.resonance.ac.in | E-mail : contact@resonance.ac.in | CIN : U80302RJ2007PLC024029

Toll Free : 1800 258 5555 | 7340010333 | [facebook.com/ResonanceEdu](https://www.facebook.com/ResonanceEdu) | twitter.com/ResonanceEdu | www.youtube.com/reswatch | blog.resonance.ac.in

This solution was download from Resonance JEE (MAIN) 2022 Solution portal

PAGE # 9




Resonance[®]
Educating for better tomorrow

BEST RANK

from Kota Classroom among
all Institutes of Kota

AIR
8

CHAITANYA AGGARWAL
JEE (Advanced) 2021



Numbers that Inspire Students to EXCEL

Trust of 9,50,000+ STUDENTS*	Total Selections 1,78,546 JEE (Adv.) - Eligibility for JEE (Adv.)** - NEET (UG)	AIRs in TOP-100 350 JEE (Adv.) - JEE (Main) - NEET (UG)	Pool of 800+ FACULTY	Study Centres in 70+ CITIES
---	---	--	-----------------------------------	--

* Since 2001 | **Students Qualified from JEE (Main) to JEE (Advanced) since 2013
Total Selections & AIR in TOP-100 in JEE (Adv.) / IIT-JEE (since 2002), JEE (Main)/ AIEEE (since 2005), NEET (UG) / APMT (since 2012) | AIR: All India Rank

For Class XII Passed Students

TARGET JEE (Main+Advanced) 2023 COURSE VISHESH (JD) CLASS STARTS 27th June & 4th July	TARGET JEE (Main) 2023 COURSE ABHYAAS (ED) CLASS STARTS 27th June & 4th July
---	--

Scholarship upto 90%*
on the basis of JEE (Main) Percentile Score

अपनी **स्कॉलरशिप** जानने के लिए **अपनी जेईई (मैन) परसेंटाइल वाट्सअप करें: 73400-10345**

Resonance Eduventures Ltd.
Kota Study Centre & Registered Corporate Office: CG Tower, A-46 & 52, IPIA, Near City Mall, Jhalawar Road, Kota (Raj.) - 324005
Tel. No.: 0744-2777777, 2777700 | CIN: U80302RJ2007PLC024029 | www.resonance.ac.in | contact@resonance.ac.in

T & C Apply